



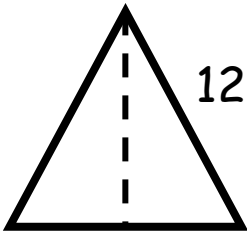
Name: _____

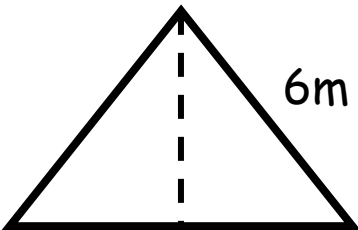



Area & Perimeter

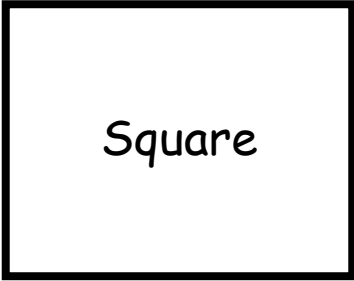
Solve the equations.


1. 
10m
4m
Area _____
Perimeter _____

4. 
12m
8m
Area _____


2. 
6m
9m
Area _____

5. 
7m
20m
Area _____
Perimeter _____

3. 
Square
7m
Area _____
Perimeter _____

6. 
8m
11m
Area _____
Perimeter _____

Area & Perimeter



Solve the equations.

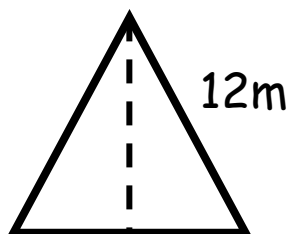


10m

Area - 40m^2

Perimeter - 28m

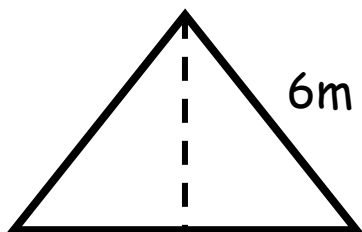
4.



8m

Area - 48m^2

2.



9m

Area - 27m^2

5.



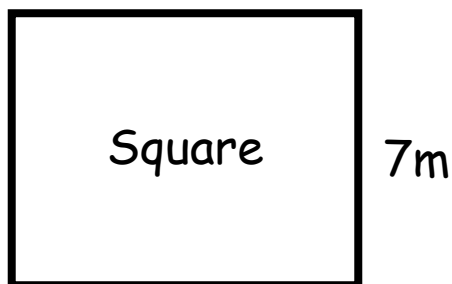
7m

20m

Area - 140m^2

Perimeter - 54m

3.



Square

7m

Area - 49m^2

Perimeter - 28m

6.



11m

8m

Area - 88m^2

Perimeter - 38m