


Name: _____



Counting Objects

Answer the following:



How many colours are there in Germany's Flag:

.....



How many ears are there on the face?


.....

How many noses are there in the face?

.....

How many eyes are there on the face?


.....



How many pyramids are in the picture?

.....

.....




The Numbers above can be ordered as 1,

..... ,,

..... ,

Or as 4,

..... ,,,



Counting Objects

Answer the following:



How many colours are there in Germany Flag:

3

.....



How many ears are there in the face? 2


.....

How many nose are there in the face? 1

.....

How many eyes are there in the face? 2


.....



How many pyramids are in the picture?

6

.....



The Numbers above can be ordered as

1, 2 3
.....,.....,
4

Or as 4, 2 1
3.....,.....,