


Name: _____



Counting

Count and Write the following objects.














Counting


Count and Write the following objects.



8



10



14



5



4
