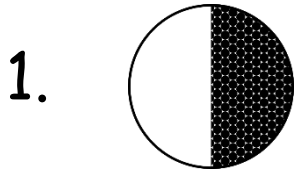


Name: \_\_\_\_\_

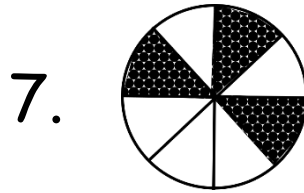


# Fractions

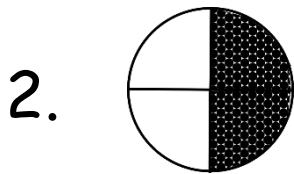
What fraction of the shape is shaded?



\_\_\_\_\_



\_\_\_\_\_



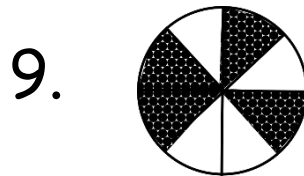
\_\_\_\_\_



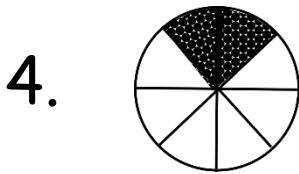
\_\_\_\_\_



\_\_\_\_\_



\_\_\_\_\_



\_\_\_\_\_



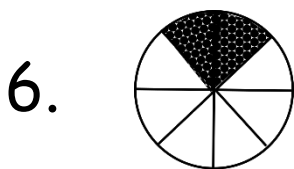
\_\_\_\_\_



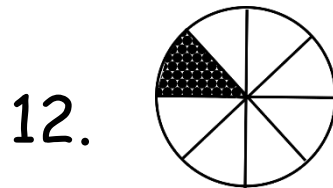
\_\_\_\_\_



\_\_\_\_\_



\_\_\_\_\_


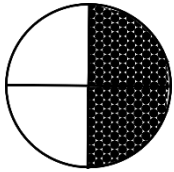

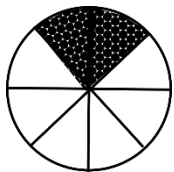


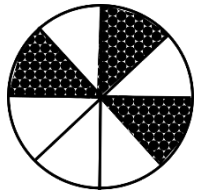

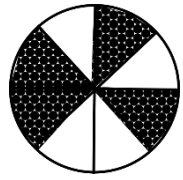


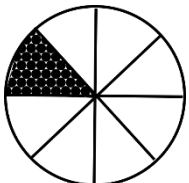


\_\_\_\_\_



# Fractions

What fraction of the shape is shaded?

1.   $\frac{1}{2}$
2.   $\frac{2}{4}$
3.   $\frac{1}{7}$
4.   $\frac{2}{8}$
5.   $\frac{1}{5}$
6.   $\frac{1}{4}$
7.   $\frac{3}{8}$
8.   $\frac{2}{3}$
9.   $\frac{4}{8}$
10.   $\frac{1}{2}$
11.   $\frac{2}{4}$
12.   $\frac{1}{8}$