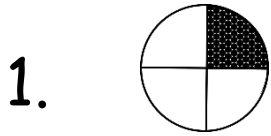


Name: _____

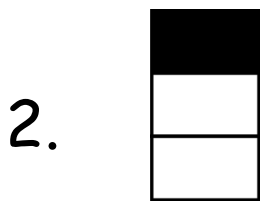


Fractions

What fraction of the shape is shaded?

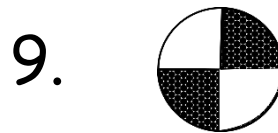




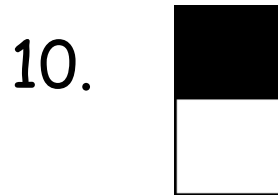






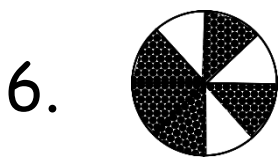










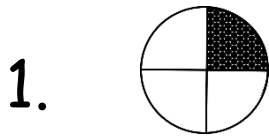






Fractions

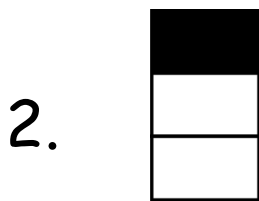
What fraction of the shape is shaded?



$\frac{1}{4}$



$\frac{4}{6}$



$\frac{1}{3}$



$\frac{6}{7}$



$\frac{3}{4}$



$\frac{2}{4}$



$\frac{5}{7}$




$\frac{1}{2}$



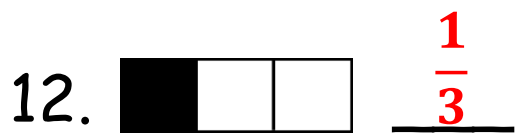
$\frac{4}{5}$



$\frac{5}{8}$



$\frac{5}{8}$



$\frac{1}{3}$