


Name: _____



Fractions

What fraction of the shape is shaded?











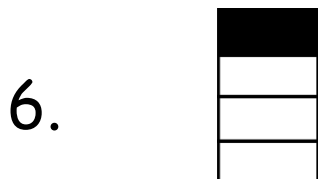















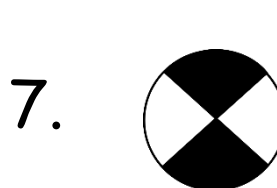


Fractions

What fraction of the shape is shaded?



$$\frac{1}{7}$$



$$\frac{2}{4}$$



$$\frac{3}{7}$$



$$\frac{6}{8}$$



$$\frac{6}{8}$$



$$\frac{3}{4}$$



$$\frac{4}{7}$$



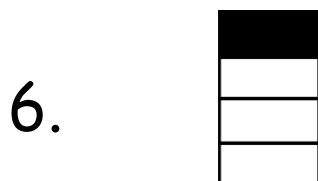
$$\frac{4}{8}$$




$$\frac{3}{8}$$



$$\frac{7}{8}$$



$$\frac{1}{4}$$



$$\frac{1}{2}$$