


Name: \_\_\_\_\_

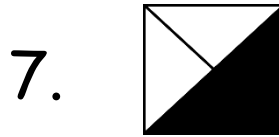


# Fractions

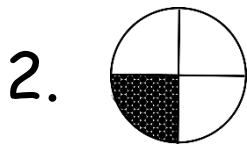
What fraction of the shape is shaded?



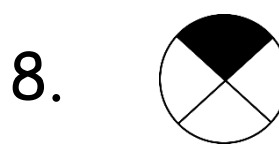
\_\_\_\_\_



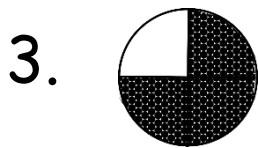
\_\_\_\_\_



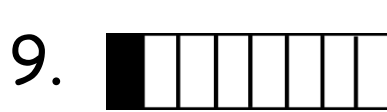
\_\_\_\_\_



\_\_\_\_\_



\_\_\_\_\_



\_\_\_\_\_



\_\_\_\_\_



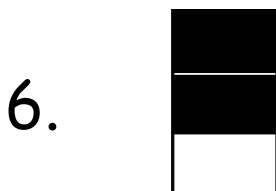
\_\_\_\_\_



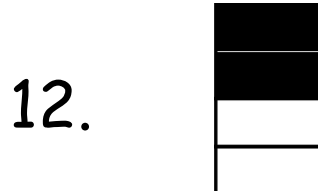
\_\_\_\_\_



\_\_\_\_\_



\_\_\_\_\_



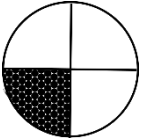

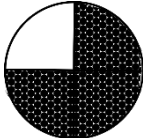









\_\_\_\_\_



# Fractions

What fraction of the shape is shaded?

1.   $\frac{1}{2}$
7.   $\frac{2}{4}$
2.   $\frac{1}{4}$
8.   $\frac{1}{4}$
3.   $\frac{3}{4}$
9.   $\frac{1}{8}$
4.   $\frac{3}{6}$
10.   $\frac{2}{8}$
5.   $\frac{5}{6}$
11.   $\frac{2}{7}$
6.   $\frac{2}{3}$
12.   $\frac{2}{4}$