



Name: \_\_\_\_\_




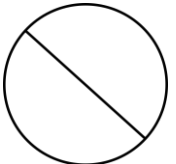
# Fractions

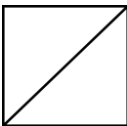
Shade the shapes to match the fractions.

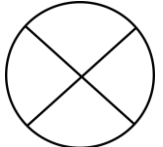
1.  $\frac{1}{2} =$  


7.  $\frac{1}{3} =$  

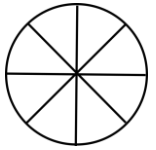
2.  $\frac{2}{4} =$  

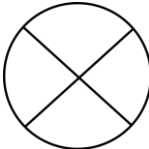
8.  $\frac{1}{2} =$  


3.  $\frac{1}{2} =$  


9.  $\frac{2}{4} =$  


4.  $\frac{2}{4} =$  

10.  $\frac{1}{8} =$  

5.  $\frac{1}{4} =$  

11.  $\frac{3}{4} =$  


6.  $\frac{2}{3} =$  


12.  $\frac{1}{4} =$  





# Fractions


Shade the shapes to match the fractions.


1.  $\frac{1}{2} =$  


7.  $\frac{1}{3} =$  

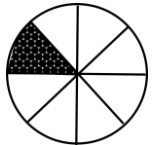
2.  $\frac{2}{4} =$  


8.  $\frac{1}{2} =$  


3.  $\frac{1}{2} =$  


9.  $\frac{2}{4} =$  

4.  $\frac{2}{4} =$  

10.  $\frac{1}{8} =$  

5.  $\frac{1}{4} =$  

11.  $\frac{3}{4} =$  

6.  $\frac{2}{3} =$  

12.  $\frac{1}{4} =$  