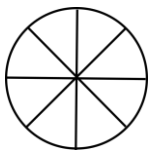



Name: _____

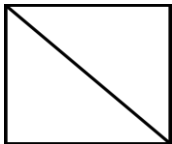


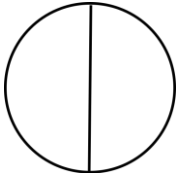
Fractions


Shade the shapes to match the fractions.


1. $\frac{7}{8}$ = 

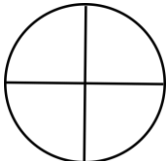
7. $\frac{1}{7}$ = 

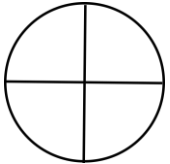
2. $\frac{1}{2}$ = 


8. $\frac{1}{2}$ = 


3. $\frac{1}{6}$ = 


9. $\frac{1}{3}$ = 

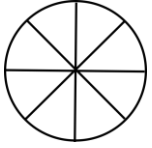
4. $\frac{1}{4}$ = 

10. $\frac{3}{4}$ = 

5. $\frac{2}{4}$ = 

11. $\frac{5}{6}$ = 

6. $\frac{5}{8}$ = 

12. $\frac{2}{8}$ = 



Fractions

Shade the shapes to match the fractions.

