



Name: _____

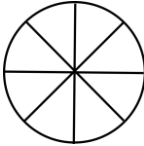


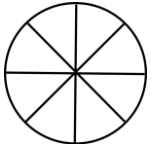
Fractions


Shade the shapes to match the fractions.


1. $\frac{1}{3} =$ 


7. $\frac{3}{4} =$ 

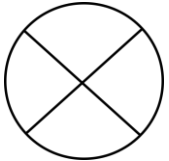
2. $\frac{3}{8} =$ 

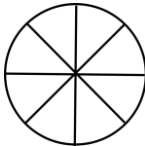
8. $\frac{5}{8} =$ 


3. $\frac{5}{6} =$ 


9. $\frac{2}{8} =$ 


4. $\frac{4}{8} =$ 

10. $\frac{2}{4} =$ 

5. $\frac{6}{8} =$ 

11. $\frac{3}{4} =$ 


6. $\frac{1}{4} =$ 


12. $\frac{4}{7} =$ 

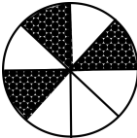



Fractions


Shade the shapes to match the fractions.


1. $\frac{1}{3} =$ 


7. $\frac{3}{4} =$ 


2. $\frac{3}{8} =$ 


8. $\frac{5}{8} =$ 


3. $\frac{5}{6} =$ 


9. $\frac{2}{8} =$ 

4. $\frac{4}{8} =$ 

10. $\frac{3}{4} =$ 

5. $\frac{6}{8} =$ 

11. $\frac{3}{4} =$ 

6. $\frac{1}{4} =$ 

12. $\frac{4}{7} =$ 