



Name: _____


Area & Perimeter





Solve the equations.

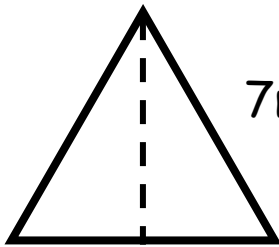
1.  6m
6m
Area _____
Perimeter _____

4.  5m
4m
Area _____
Perimeter _____

2.  4m
7m
Area _____
Perimeter _____

5.  3m
8m
Area _____
Perimeter _____

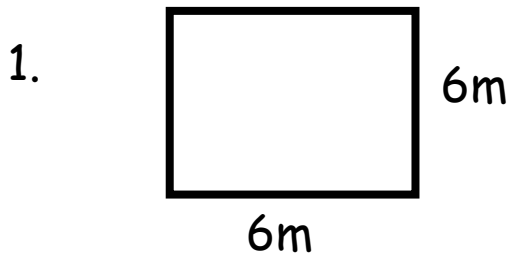
3.  5m
5m
Area _____
Perimeter _____

6.  7m
2m
Area _____
Perimeter _____



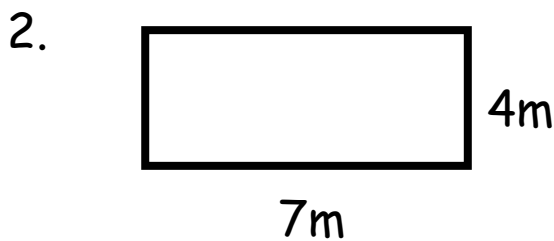
Area & Perimeter

Solve the equations.



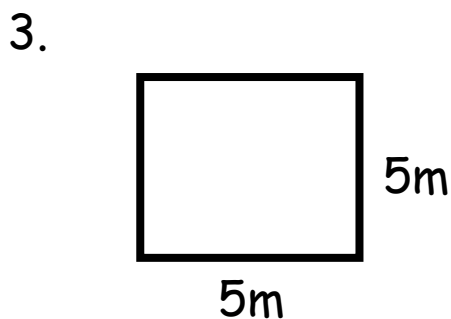
$$\text{Area} = 36\text{m}^2$$

$$\text{Perimeter} = 24\text{m}$$



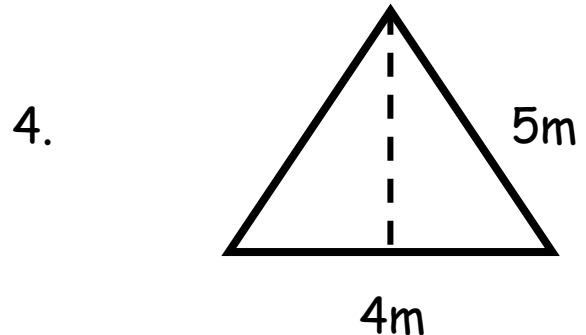
$$\text{Area} = 28\text{m}^2$$

$$\text{Perimeter} = 22\text{m}$$



$$\text{Area} = 25\text{m}^2$$

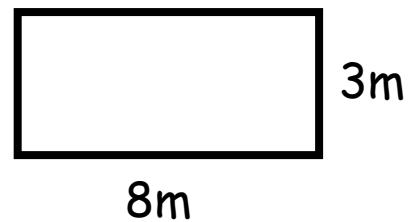
$$\text{Perimeter} = 20\text{m}$$



$$\text{Area} = 10\text{m}^2$$

$$\text{Perimeter} = 14\text{m}$$

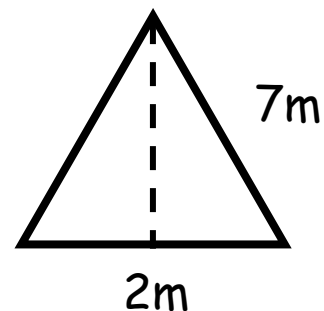
5.



$$\text{Area} = 24\text{m}^2$$

$$\text{Perimeter} = 22\text{m}$$

6.



$$\text{Area} = 7\text{m}^2$$

$$\text{Perimeter} = 16\text{m}$$