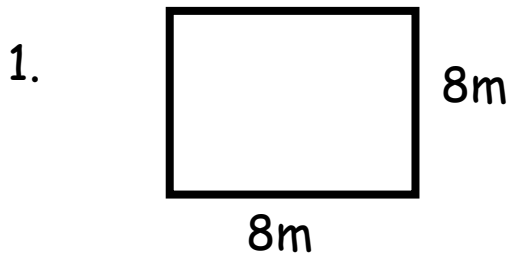


Name: _____



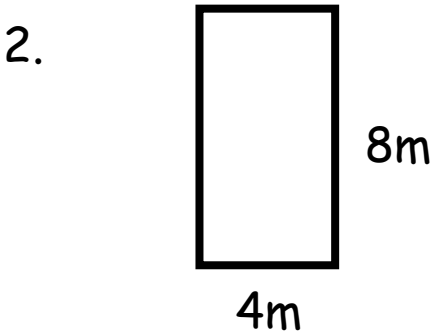
Area & Perimeter

Solve the equations.



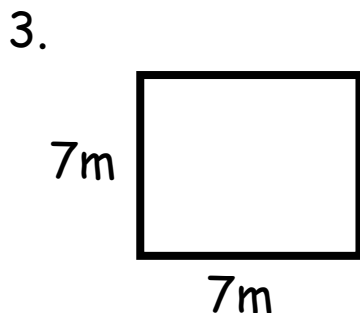
Area _____

Perimeter _____



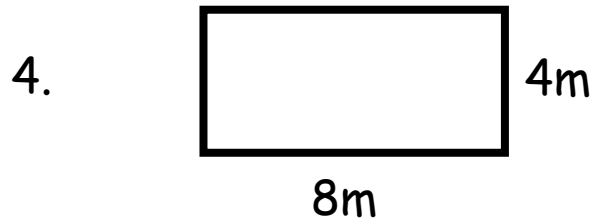
Area _____

Perimeter _____



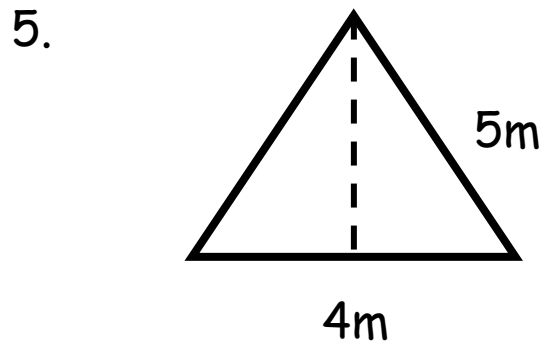
Area _____

Perimeter _____

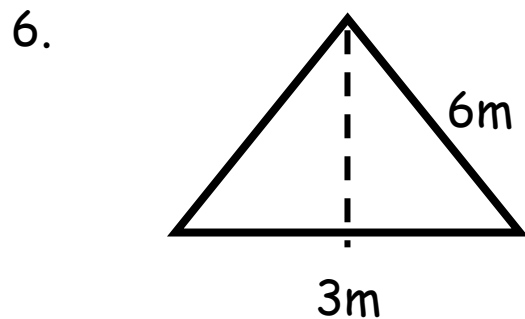


Area _____

Perimeter _____



Area _____

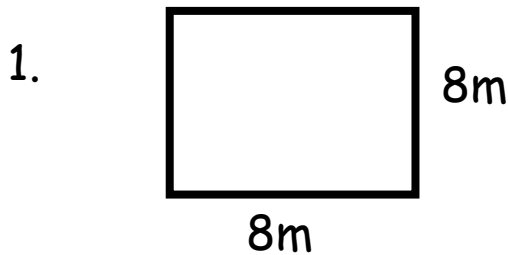


Area _____



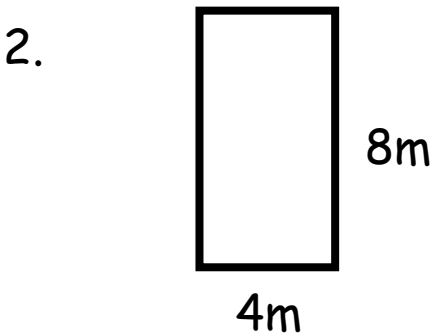
Area & Perimeter

Solve the equations.



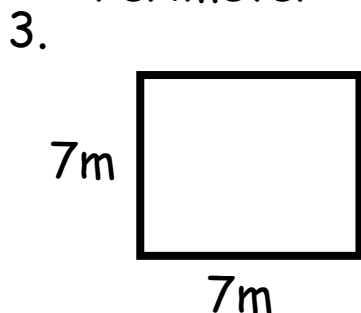
$$\text{Area} = 64\text{m}^2$$

$$\text{Perimeter} = 32\text{m}$$



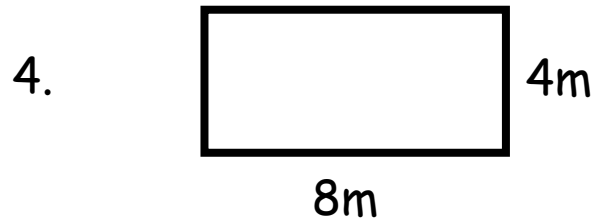
$$\text{Area} = 32\text{m}^2$$

$$\text{Perimeter} = 24\text{m}$$



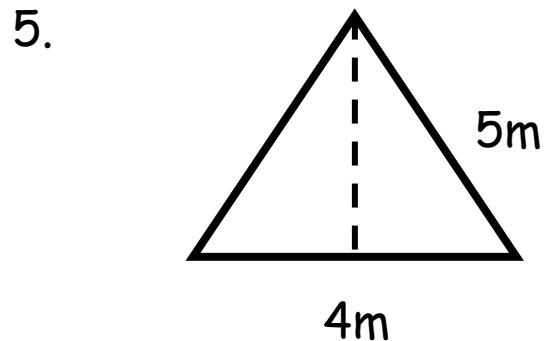
$$\text{Area} = 49\text{m}^2$$

$$\text{Perimeter} = 28\text{m}$$

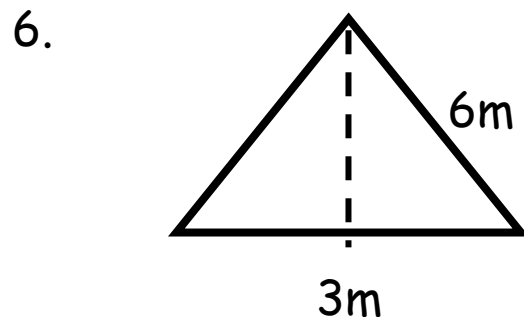


$$\text{Area} = 32\text{m}^2$$

$$\text{Perimeter} = 24\text{m}$$



$$\text{Area} = 10\text{m}^2$$



$$\text{Area} = 18\text{m}^2$$