


Name: _____



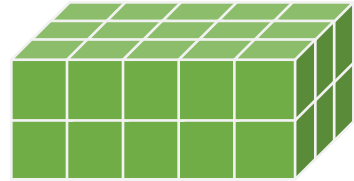
Volume

Find the volume of each shape by counting the cubes.


1.




2.



3.




4.



5.



6.






Volume

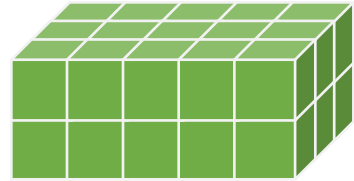
Find the volume of each shape by counting the cubes.

1.




15

2.




30

3.



16

4.




32

5.



24

6.



18
