


Name: \_\_\_\_\_



# Volume


Find the volume of each shape by counting the cubes.

1.



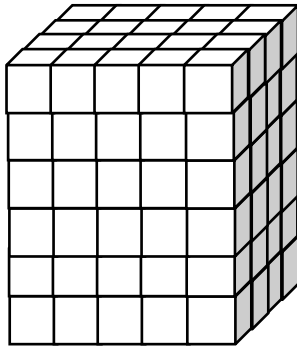
\_\_\_\_\_

2.




\_\_\_\_\_

3.




\_\_\_\_\_

4.




\_\_\_\_\_

5.



\_\_\_\_\_

6.




\_\_\_\_\_



# Volume

Find the volume of each shape by counting the cubes.


1.



**48**

---

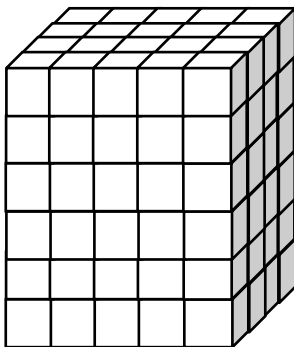
2.



**16**

---


3.



**120**

---


4.



**72**

---


5.



**120**

---

6.



**120**

---

