



Mental Maths

30 Weeks

Slambo Resources

Mental Maths



10 Weeks

Week 1

Monday	Tuesday	Wednesday	Thursday
1. $1 + 4 =$ 2. $2 + 4 =$ 3. How many ? 4. How many altogether? 5. Write the number nine. 6. What comes before 10? 7. $3 + 3 =$ $4 + 3 =$	1. $1 + 5 =$ 2. $2 + 5 =$ 3. How many ? 4. How many altogether? 5. Write the number ten. 6. What comes before 11? 7. $3 + 4 =$ $4 + 4 =$	1. $1 + 6 =$ 2. $2 + 6 =$ 3. How many ? 4. How many altogether? 5. Write the number eleven. 6. What comes before 12? 7. $3 + 5 =$ $4 + 5 =$	1. $1 + 7 =$ 2. $2 + 7 =$ 3. How many ? 4. How many altogether? 5. Write the number twelve. 6. What comes before 13? 7. $3 + 6 =$ $4 + 6 =$

Week 10

Monday	Tuesday
1. $10 + 0 =$ 2. $20 + 0 =$ 3. Add 5 more . 4. Add 10 more . 5. Draw a pentagon.	1. $10 + 1 =$ 2. $10 + 2 =$ 3. Add 5 more . 4. Add 10 more . 5. Draw an oval.

Slambo Resources

Mental Maths



10 Weeks

Week 1

Monday	Tuesday	Wednesday	Thursday
1. $10 + 7 =$ 2. $10 + 6 =$ 3. 4 less than 10 is 4. Minus 2 . 5. Add 10 . 6. $3 + 3 =$ 7. Double 5. 8. 25, 34, 24, 27 9. Color 3 boxes.	1. $10 + 5 =$ 2. $10 + 4 =$ 3. 4 more than 8 is 4. Minus 5 . 5. Add 10 . 6. $2 + 2 =$ 7. Double 2. 8. 16, 19, 17, 18 9. Color 3 boxes.	1. $10 + 7 =$ 2. $10 + 6 =$ 3. 7 less than 10 is 4. Minus 3 . 5. Add 10 . 6. $2 + 2 =$ 7. Double 2. 8. 19, 16, 17, 18 9. Color 3 boxes.	1. $10 + 6 =$ 2. $10 + 5 =$ 3. Write forty two 4. Add 5 more . 5. Subtract 5 . 6. $10 + 10 =$ 7. 7 plus 8 = 8. 22, 25, 25, 26 9. Color 3 boxes.

Week 10

Monday	Tuesday	Wednesday	Thursday
1. $10 + 4 =$ 2. $10 + 3 =$ 3. Write forty two 4. Add 5 more . 5. Subtract 5 . 6. $10 + 10 =$ 7. 12 plus 6 = 8. 19, 16, 17, 20 9. Color 3 boxes.	1. $10 + 5 =$ 2. $10 + 4 =$ 3. Write eleven 4. Add 5 more . 5. Subtract 5 . 6. $10 + 10 =$ 7. 12 plus 6 = 8. 19, 16, 17, 20 9. Color 3 boxes.	1. $10 + 7 =$ 2. $10 + 6 =$ 3. Write sixteen 4. Add 5 more . 5. Subtract 5 . 6. $10 + 10 =$ 7. 12 plus 6 = 8. 16, 17, 20 9. Color 3 boxes.	1. $10 + 8 =$ 2. $10 + 7 =$ 3. Write thirty two 4. Add 5 more . 5. Subtract 5 . 6. $10 + 10 =$ 7. 16 plus 6 = 8. 16, 16, 17, 20 9. Color 3 boxes.

Slambo Resources

Slambo Resources

Week 1

Monday	Tuesday	Wednesday	Thursday
1. $10 + 6 =$ 2. $10 + 5 =$ 3. Repeat - How many stars? 4. Double the number of stars. 5. Add 5 more . 6. Which is heavier? Truck or Car. 7. $2 + 2 =$ 8. 25, 30, 4, 18 9. Circle the largest. 10. Write the number thirty two.	1. $10 + 4 =$ 2. $10 + 3 =$ 3. Repeat - How many stars? 4. Double the number of stars. 5. Add 5 more . 6. Which is longer? Paper or Paper. 7. $2 + 2 =$ 8. 16, 16, 16, 16 9. Circle the largest. 10. Write the number thirty two.	1. $10 + 7 =$ 2. $10 + 6 =$ 3. Month after March 4. Double the number of stars. 5. Add 5 more . 6. Which is smaller? Dog or Dog. 7. $2 + 2 =$ 8. 25, 34, 24, 27 9. Circle the smallest. 10. Write the number fourteen.	1. $10 + 8 =$ 2. $10 + 7 =$ 3. Month before February 4. Double the number of stars. 5. Add 5 more . 6. Which is smaller? Dog or Dog. 7. $2 + 2 =$ 8. 19, 16, 17, 18 9. Circle the smallest. 10. Write the number fourteen.

Grade 1

Grade 1

Grade 1



Mental Maths

10 weeks

























Week 1		Mental Maths		Week 6		Mental Maths		Week 10		Mental Maths					
Monday	1. $9 + 4 =$ _____ 2. $11 - 4 =$ _____ 3. How many ? _____ 4. How many ? _____ 5. How many altogether? _____ 6. Write the number nine _____ 7. What comes before 53? _____ 8. 2, 3, 4, _____, 6, 7, 8 _____ _____ 9. Cross out half the puppies. How many left? _____	Tuesday	1. $8 + 7 =$ _____ 2. $16 - 6 =$ _____ 3. How many ? _____ 4. How many ? _____ 5. How many altogether? _____ 6. Write the number thirteen _____ 7. What comes after 26? _____ 8. 5, 4, _____, 8, 9, 10 _____ _____ 9. Cross out four puppies. How many left? _____	Wednesday	1. $12 + 6 =$ _____ 2. $13 - 5 =$ _____ 3. _____ 4. _____ 5. _____ 6. _____ 7. _____ 8. _____ 9. _____ 10. _____	Thursday	1. $8 + 8 =$ _____ 2. $19 - 7 =$ _____ 3. _____ 4. _____ 5. _____ 6. _____ 7. _____ 8. _____ 9. _____ 10. _____	Monday	1. $30 + 10 =$ _____ _____ 3. Add 5 more _____ 4. Add 10 more _____ 5. Draw a pentagon 6. Write the number twenty six _____ 7. What comes before 53? _____ 8. 15, 16, _____, 18, 19 9. 20 plus 10 = _____ 10. Circle odd numbers 11 14 18 9 2 5	Tuesday	1. $20 + 10 =$ _____ 2. $12 - 6 =$ _____ _____ 3. Add 5 more _____ 4. Add 10 more _____ 5. Draw an oval 6. Write the number eighteen _____ 7. What comes after 37? _____ 8. 41, 42, _____, 44, 45 9. 11 minus 4 = _____ 10. Circle even numbers 12 9 13 11 10 2	Wednesday	1. $11 + 8 =$ _____ 2. $18 - 10 =$ _____ _____ 3. Add 5 more _____ 4. Add 10 more _____ 5. Draw a heart 6. Write the number thirty two _____ 7. What comes before 28? _____ 8. 38, 39, _____, 41, 42 9. 18 plus 5 = _____ 10. Circle odd numbers 15 13 6 4 1 12	Thursday	1. $55 + 5 =$ _____ 2. $17 - 7 =$ _____ _____ 3. Add 5 more _____ 4. Add 10 more _____ 5. Draw a star 6. Write the number seven _____ 7. What comes after 44? _____ 8. 25, 26, _____, 28, 29 9. 15 minus 5 = _____ 10. Circle _____

Grade 1



Mental Maths 2

10 Weeks

Week 1		Week 7		Week 10			
Mental Maths		Mental Maths		Mental Maths			
<p>Monday</p> <p>1. $13 + 6 =$ _____</p> <p>2. $11 - 4 =$ _____</p> <p>3. Square – How many sides? _____</p>  <p>4. Double the  _____</p> <p>5. Add 7 more  _____</p> <p>6. Which is heavier? Truck <input type="checkbox"/> Car <input type="checkbox"/></p> <p>7. $2 + 2 + 2 =$ _____</p> <p>8. 2, 3, 4, _____, 6, 7, 8</p> <p>9. Circle the largest 22 31 13 12 27</p> <p>10. Write the number fifty five _____</p>	<p>Tuesday</p> <p>1. $12 + 8 =$ _____</p> <p>2. $15 - 6 =$ _____</p> <p>3. Triangle – How many sides? _____</p>  <p>4. Double the  _____</p> <p>5. Add 7 more  _____</p> <p>6. Which is longer? Finger <input type="checkbox"/> Paper <input type="checkbox"/></p> <p>7. $4 + 2 + 4 =$ _____</p> <p>8. 34, 35, _____, 37, 38</p> <p>9. Circle the largest 18 44 34 43 4</p> <p>10. Write the number thirty two _____</p>	<p>Monday</p> <p>1. $25 + 7 =$ _____</p> <p>2. $22 - 5 =$ _____</p> <p>3. Month after March _____</p>  <p>4. Add 5 more  _____</p> <p>5. Add 7 more  _____</p> <p>6. Is 11 odd or even? Odd <input type="checkbox"/> Even <input type="checkbox"/></p> <p>7. $10 + 10 =$ _____</p> <p>8. 14, 15, _____, 17, 18</p> <p>9. Circle the smallest 27 45 34 21 12</p> <p>10. Write the number forty three _____</p>	<p>Tuesday</p> <p>1. $19 + 6 =$ _____</p> <p>2. $13 - 4 =$ _____</p> <p>3. Month before February _____</p>  <p>4. Add 3 more  _____</p> <p>5. Add 9 more  _____</p> <p>6. Is 8 odd or even? Odd <input type="checkbox"/> Even <input type="checkbox"/></p> <p>7. $50 + 10 =$ _____</p> <p>8. 25, 26, _____, 28, 29</p> <p>9. Circle the smallest 20 21 34 52 25</p> <p>10. Write the number twenty six _____</p>	<p>Monday</p> <p>1. $15 + 10 =$ _____</p> <p>2. $16 - 5 =$ _____</p> <p>3. Month after February _____</p>  <p>4. Add 8 more  _____</p> <p>5. Add 9 more  _____</p> <p>6. Is 16 odd or even? Odd <input type="checkbox"/> Even <input type="checkbox"/></p> <p>7. $20 + 10 =$ _____</p> <p>8. 24, 30, _____, 32, 35</p> <p>9. Circle the smallest 22 26 43 21 10</p> <p>10. Write the number forty one _____</p>	<p>Tuesday</p> <p>1. $19 + 5 =$ _____</p> <p>2. $27 - 5 =$ _____</p> <p>3. Month before September _____</p>  <p>4. Add 5 more  _____</p> <p>5. Add 9 more  _____</p> <p>6. Is 8 odd or even? Odd <input type="checkbox"/> Even <input type="checkbox"/></p> <p>7. $10 + 10 =$ _____</p> <p>8. 18, 19, _____, 21, 22</p> <p>9. Circle the smallest 41 43 45 51 50</p> <p>10. Write the number sixteen _____</p>	<p>Wednesday</p> <p>1. $20 + 5 =$ _____</p> <p>2. $18 - 6 =$ _____</p> <p>3. Month after May _____</p>  <p>4. Add 3 more  _____</p> <p>5. Add 4 more  _____</p> <p>6. Is 14 odd or even? Odd <input type="checkbox"/> Even <input type="checkbox"/></p> <p>7. $50 + 10 =$ _____</p> <p>8. 34, 37, _____, 39, 40</p> <p>9. Circle the smallest 18 16 24 42 15</p> <p>10. Write the number twenty two _____</p>	<p>Thursday</p> <p>1. $36 + 4 =$ _____</p> <p>2. $26 - 4 =$ _____</p> <p>3. Month before December _____</p>  <p>4. Add 2 more  _____</p> <p>5. Add 8 more  _____</p> <p>6. Is 13 odd or even? Odd <input type="checkbox"/> Even <input type="checkbox"/></p> <p>7. $40 + 10 =$ _____</p> <p>8. 22, 23, _____, 25, 26</p> <p>9. Circle the smallest 32 34 45 17 19</p> <p>10. Write the number fourteen _____</p>

Grade 1





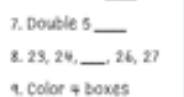
Mental Maths

10 Weeks

Week 1

Mental Maths

Monday

- $22 + 7 =$ _____
- $16 - 6 =$ _____
- 4 less than 15 is _____

- Minus 5  _____
- Add 10  _____
- $3 + 3 + 3 =$ _____
- Double 5 _____
- 23, 24, _____, 26, 27
- Color 4 boxes

--	--	--	--

10. How many are not colored? _____

Tuesday

- $18 + 5 =$ _____
- $22 - 5 =$ _____
- 6 more than 8 is _____

- Minus 5  _____
- Add 10  _____
- $2 + 2 + 2 =$ _____
- Double 3 _____
- 14, 15, _____, 17, 18
- Color 7 boxes

--	--	--	--	--	--	--

10. How many are not colored? _____

Wednesday

- $14 + 7 =$ _____
- $20 - 5 =$ _____
- 7 less than 20 _____

- Minus 5  _____
- Add 10  _____
- $5 + 5 + 5 =$ _____
- Double 2 _____
- 33, 34, _____, 36
- Color 6 boxes

--	--	--	--	--	--

10. How many are not colored? _____

Thursday

- $132 + 6 =$ _____
- Write twenty _____
- Add 7 more  _____
- Subtract 6  _____
- $30 + 10 =$ _____
- 10 plus 5 = _____
- 16, 17, _____, 19, 20
- Color 3 boxes

--	--	--

Week 6


Monday

- $120 + 8 =$ _____
- $32 - 5 =$ _____
- Write twenty _____
- Add 7 more  _____
- Subtract 6  _____
- $30 + 10 =$ _____
- 10 plus 5 = _____
- 16, 17, _____, 19, 20
- Color 3 boxes

--	--	--

10. How many are not colored? _____

Tuesday

- $132 + 7 =$ _____
- $16 - 6 =$ _____
- Write six _____
- Add 5 more  _____
- Subtract 4  _____
- $40 + 10 =$ _____
- 7 plus 4 = _____
- 44, 45, _____, 47, 48
- Color 6 boxes

--	--	--	--	--	--

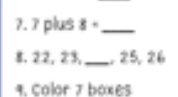
10. How many are not colored? _____

Week 10

Mental Maths

Monday




- $144 + 5 =$ _____
- $24 - 6 =$ _____
- Write forty two _____

- Add 5 more  _____
- Subtract 5  _____
- $50 + 10 =$ _____
- 7 plus 8 = _____
- 22, 23, _____, 25, 26
- Color 7 boxes

--	--	--	--	--	--	--

10. How many are not colored? _____

Tuesday

- $119 + 9 =$ _____
- $36 - 5 =$ _____
- Write eleven _____

- Add 4 more  _____
- Subtract 4  _____
- $30 + 10 =$ _____
- 7.5 plus 15 = _____
- 34, 40, _____, 42, 43
- Color 2 boxes

--	--

10. How many are not colored? _____

Wednesday

- $152 + 7 =$ _____
- $44 - 6 =$ _____
- Write sixteen _____

- Add 6 more  _____
- Subtract 4  _____
- $20 + 10 =$ _____
- 12 plus 6 = _____
- 16, 17, _____, 19, 20
- Color 4 boxes

--	--	--	--

10. How many are not colored? _____

Thursday

- $118 + 8 =$ _____
- $12 - 7 =$ _____
- Write thirty two _____

- Add 5 more  _____
- Subtract 3  _____
- $60 + 10 =$ _____
- 16 plus 6 = _____
- 45, 46, _____, 48
- Color _____

--	--	--	--	--	--	--	--

10. How many are not colored? _____

Grade 1



Mental Maths

10 weeks

Week 1				Week 2				Week 3				Week 4				Week 5				Week 6				Week 7				
Mental Maths				Mental Maths				Mental Maths				Mental Maths				Mental Maths				Mental Maths				Mental Maths				
Monday	Tuesday	Wednesday	Thursday	Monday	Tuesday	Wednesday	Thursday	Monday	Tuesday	Wednesday	Thursday	Monday	Tuesday	Wednesday	Thursday	Monday	Tuesday	Wednesday	Thursday	Monday	Tuesday	Wednesday	Thursday	Monday	Tuesday	Wednesday	Thursday	
1. $20 + 6 =$ _____	1. $10 + 5 =$ _____	1. $30 + 4 =$ _____	1. $40 + 3 =$ _____	1. $10 + 5 =$ _____	1. $20 + 10 =$ _____	1. $25 + 10 =$ _____	1. $65 + 10 =$ _____	1. $10 + 5 =$ _____	1. $17 + 3 =$ _____	1. $9 + 8 =$ _____	1. $80 + 11 =$ _____	1. $10 + 5 =$ _____	1. $15 + 5 =$ _____	1. $60 + 10 =$ _____	1. $80 + 11 =$ _____	1. $60 + 10 =$ _____	1. $15 + 5 =$ _____	1. $17 + 3 =$ _____	1. $9 + 8 =$ _____	1. $80 + 11 =$ _____	1. $10 + 5 =$ _____	1. $20 + 10 =$ _____	1. $25 + 10 =$ _____	1. $65 + 10 =$ _____	1. $10 + 5 =$ _____	1. $17 + 3 =$ _____	1. $9 + 8 =$ _____	1. $80 + 11 =$ _____
2. $15 - 10 =$ _____	2. $9 - 5 =$ _____	2. $30 - 5 =$ _____	2. $15 - 10 =$ _____	2. $9 - 5 =$ _____	2. $30 - 5 =$ _____	2. $15 - 10 =$ _____	2. $15 - 10 =$ _____	2. $15 - 10 =$ _____	2. $15 - 5 =$ _____	2. $12 - 9 =$ _____	2. $16 - 5 =$ _____	2. $60 - 10 =$ _____	2. $60 - 10 =$ _____	2. $12 - 9 =$ _____	2. $16 - 5 =$ _____	2. $60 - 10 =$ _____	2. $60 - 10 =$ _____	2. $12 - 9 =$ _____	2. $15 - 5 =$ _____	2. $12 - 9 =$ _____	2. $16 - 5 =$ _____	2. $16 - 5 =$ _____	2. $16 - 5 =$ _____	2. $12 - 9 =$ _____	2. $15 - 5 =$ _____	2. $16 - 5 =$ _____	2. $16 - 5 =$ _____	
3. Write forty five	3. Write after 57	3. Write ninety one	3. Write fifty two	3. Write after 57	3. Write the number after 102	3. Write fifty two	3. Write seventy two	3. Write forty one	3. Write seventy	3. Write seventy four	3. Write ninety three	3. Write eight	3. Write sixty four	3. Write seventy four	3. Write ninety three	3. Write eight	3. Write sixty four	3. Write seventy four	3. Write ninety three	3. Write ninety three	3. Write ninety three	3. Write ninety three	3. Write ninety three	3. Write ninety three	3. Write ninety three	3. Write ninety three	3. Write ninety three	3. Write ninety three
4. How many groups of 27	4. How many groups of 57	4. How many groups of 27	4. How many groups of 67	4. How many groups of 57	4. How many groups of 57	4. How many groups of 27	4. How many groups of 67	4. How many groups of 37	4. How many groups of 27	4. How many groups of 47	4. How many groups of 27	4. How many groups of 27	4. How many groups of 27	4. How many groups of 47	4. How many groups of 27	4. How many groups of 27	4. How many groups of 27	4. How many groups of 27	4. How many groups of 47	4. How many groups of 27	4. How many groups of 27	4. How many groups of 27	4. How many groups of 27	4. How many groups of 27	4. How many groups of 27	4. How many groups of 27	4. How many groups of 27	
5. Write the number before 17	5. Write after 157	5. Write the number after 102	5. Write the number before 125	5. Write the number before 52	5. Write the number after 102	5. Write the number before 125	5. Write the number before 125	5. Write the number before 43	5. Write the number after 81	5. Write the number before 100	5. Write the number after 55	5. Write the number after 55	5. Write the number after 55	5. Write the number before 100	5. Write the number after 55	5. Write the number after 55	5. Write the number after 55	5. Write the number after 81	5. Write the number after 81	5. Write the number after 55	5. Write the number after 55	5. Write the number after 55	5. Write the number after 55	5. Write the number after 55	5. Write the number after 55	5. Write the number after 55	5. Write the number after 55	
6. 2, 4, 6, _____	6. 5, 10, _____	6. 7, 8, 9, _____	6. 8, 10, 12, _____	6. 7, 8, 9, _____	6. 7, 8, 9, _____	6. 20, 40, 60, _____	6. 8, 10, 12, _____	6. 15, 17, 19, _____	6. 15, 17, 19, _____	6. 4, 8, 16, _____	6. 4, 8, 16, _____	6. 50, 60, 70, _____	6. 50, 60, 70, _____	6. 4, 8, 16, _____	6. 4, 8, 16, _____	6. 4, 8, 16, _____	6. 4, 8, 16, _____	6. 15, 17, 19, _____	6. 15, 17, 19, _____	6. 4, 8, 16, _____	6. 4, 8, 16, _____	6. 4, 8, 16, _____	6. 4, 8, 16, _____	6. 4, 8, 16, _____	6. 4, 8, 16, _____	6. 4, 8, 16, _____	6. 4, 8, 16, _____	
7. Double 4	7. Half 100	7. Double 4	7. Double 100	7. Double 4	7. Double 4	7. Half 100	7. Double 100	7. Double 2	7. Half 10	7. Double 20	7. Half 200	7. Half 200	7. Double 20	7. Double 20	7. Half 10	7. Double 20	7. Half 200	7. Half 10	7. Half 10	7. Half 10	7. Half 10	7. Half 10	7. Half 10	7. Half 10	7. Half 10	7. Half 10	7. Half 10	7. Half 10
8. What is 10 more than 5?	8. What is 5 more than 30?	8. What is 8 less than 10?	8. What is 4 more than 26?	8. What is 10 more than 5?	8. What is 5 more than 30?	8. What is 8 less than 10?	8. What is 4 more than 26?	8. What is 4 more than 26?	8. What is 10 less than 9?	8. What is 4 more than 5?	8. What is 4 less than 100?	8. What is 4 less than 100?	8. What is 4 less than 100?	8. What is 4 more than 5?	8. What is 10 less than 9?	8. What is 4 more than 5?	8. What is 4 less than 100?	8. What is 10 less than 9?	8. What is 10 less than 9?	8. What is 4 less than 100?	8. What is 4 less than 100?	8. What is 4 less than 100?	8. What is 4 less than 100?	8. What is 4 less than 100?	8. What is 4 less than 100?	8. What is 4 less than 100?	8. What is 4 less than 100?	
9. Circle the largest 3, 1, 8, 4	9. Circle the largest 40, 80, 40, 20	9. Circle the smallest 0, 22, 19, 25	9. Circle the largest 42, 142, 41, 16	9. Circle the largest 3, 1, 8, 4	9. Circle the largest 40, 80, 40, 20	9. Circle the smallest 0, 22, 19, 25	9. Circle the largest 42, 142, 41, 16	9. Circle the largest 40, 6, 44, 46	9. Circle the smallest 24, 19, 44, 34	9. Circle the largest 23, 32, 52, 55	9. Circle the largest 23, 32, 52, 55	9. Circle the largest 23, 32, 52, 55	9. Circle the largest 23, 32, 52, 55	9. Circle the largest 23, 32, 52, 55	9. Circle the smallest 24, 19, 44, 34	9. Circle the largest 23, 32, 52, 55	9. Circle the smallest 24, 19, 44, 34	9. Circle the largest 23, 32, 52, 55	9. Circle the smallest 24, 19, 44, 34	9. Circle the largest 23, 32, 52, 55	9. Circle the largest 23, 32, 52, 55	9. Circle the largest 23, 32, 52, 55	9. Circle the largest 23, 32, 52, 55	9. Circle the largest 23, 32, 52, 55	9. Circle the largest 23, 32, 52, 55	9. Circle the largest 23, 32, 52, 55	9. Circle the largest 23, 32, 52, 55	
10. $4 + 9 + 4 =$ _____	10. $10 + 3 + 2 =$ _____	10. $2 + 5 + 3 =$ _____	10. $5 + 2 + 7 =$ _____	10. $4 + 9 + 4 =$ _____	10. $10 + 3 + 2 =$ _____	10. $2 + 5 + 3 =$ _____	10. $5 + 2 + 7 =$ _____	10. $7 + 2 + 2 =$ _____	10. $50 + 10 + 10 =$ _____	10. $8 + 2 + 3 =$ _____	10. $65 + 3 + 2 =$ _____	10. $65 + 3 + 2 =$ _____	10. $65 + 3 + 2 =$ _____	10. $8 + 2 + 3 =$ _____	10. $50 + 10 + 10 =$ _____	10. $8 + 2 + 3 =$ _____	10. $65 + 3 + 2 =$ _____	10. $8 + 2 + 3 =$ _____	10. $50 + 10 + 10 =$ _____	10. $8 + 2 + 3 =$ _____	10. $8 + 2 + 3 =$ _____	10. $8 + 2 + 3 =$ _____	10. $8 + 2 + 3 =$ _____	10. $8 + 2 + 3 =$ _____	10. $8 + 2 + 3 =$ _____	10. $8 + 2 + 3 =$ _____	10. $8 + 2 + 3 =$ _____	10. $8 + 2 + 3 =$ _____

Grade 2



Mental Maths 2

10 weeks

Week 1

Mental Maths

Monday

- $20 + 6 = \underline{\quad}$
- $27 - 10 = \underline{\quad}$
- Write sixty seven
- $10 + \underline{\quad} = 20$
- Subtract 10 from 30 = $\underline{\quad}$
- Add 9 to 5 = $\underline{\quad}$
- How many sides does a triangle have?
- 2 tens + 7 ones = $\underline{\quad}$
- Circle the even 3, 1, 11, 4
- $8 + 2 + 4 = \underline{\quad}$

Tuesday

- $14 + 7 = \underline{\quad}$
- $50 - 8 = \underline{\quad}$
- Write eighty one
- $7 + \underline{\quad} = 11$
- Subtract 6 from 20 = $\underline{\quad}$
- Add 6 to 6 = $\underline{\quad}$
- How many sides does a pentagon have?
- 5 tens + 9 ones = $\underline{\quad}$
- Circle the odd 14, 12, 5, 8
- $12 + 10 + 2 = \underline{\quad}$

Week 10

Mental Maths

Monday

- $22 + 5 = \underline{\quad}$
- $32 - 6 = \underline{\quad}$
- Write 34 in words
- $26 - \underline{\quad} = 16$
- Double 10 = $\underline{\quad}$
- Half 14 = $\underline{\quad}$
- Draw an oval
- 9 hundreds + 9 tens = $\underline{\quad}$
- Is 65 odd or even?
- $14 + 6 + 9 = \underline{\quad}$

Tuesday

- $19 + 9 = \underline{\quad}$
- $53 - 5 = \underline{\quad}$
- Write 88 in words
- $14 - \underline{\quad} = 4$
- Double 9 = $\underline{\quad}$
- Half 6 = $\underline{\quad}$
- Draw a heptagon
- 5 hundreds + 8 tens = $\underline{\quad}$
- Is 32 odd or even?
- $32 + 5 + 8 = \underline{\quad}$

Week 5

Mental Maths

Monday

- $6 + 8 = \underline{\quad}$
- $15 - 9 = \underline{\quad}$
- Write seventy five
- $6 + \underline{\quad} = 16$
- Subtract 11 from 31 = $\underline{\quad}$
- Add 4 to 39 = $\underline{\quad}$
- How many sides does a pentagon have?
- 8 tens + 3 ones = $\underline{\quad}$
- Circle the even 14, 23, 31, 11
- $3 + 4 + 5 = \underline{\quad}$

Tuesday

- $14 + 8 = \underline{\quad}$
- $27 - 8 = \underline{\quad}$
- Write twenty seven
- $18 + \underline{\quad} = 26$
- Subtract 9 from 29 = $\underline{\quad}$
- Add 6 to 36 = $\underline{\quad}$
- How many sides does a nonagon have?
- 7 tens + 2 ones = $\underline{\quad}$
- Circle the odd 12, 15, 18, 20
- $2 + 4 + 3 = \underline{\quad}$

Wednesday

- $27 + 9 = \underline{\quad}$
- $16 - 8 = \underline{\quad}$
- Write three hundred & nineteen
- $22 + \underline{\quad} = 29$
- Subtract 5 from 11 = $\underline{\quad}$
- Add 12 to 20 = $\underline{\quad}$
- How many sides does an oval have?
- 2 tens + 9 ones = $\underline{\quad}$
- Circle the 21, 11, 16
- $\underline{\quad} + 3 = \underline{\quad}$

Thursday

- $33 + 8 = \underline{\quad}$
- $39 - 9 = \underline{\quad}$
- Write six hundred & twenty one
- $31 + \underline{\quad} = 40$
- Subtract 6 from 18 = $\underline{\quad}$
- Add 9 to 29
- How many sides does a pentagon have?
- $\underline{\quad} + 3 = \underline{\quad}$

Grade 2




Mental Maths 3

10 weeks


Mental Maths

Week 6

Monday

- $14 + 10 =$ _____
- $22 - 6 =$ _____
- Write in words - 65
- $16 + \underline{\quad} = 20$
- Days in a week? _____
- Name the shape?

- How many hundreds & tens in 560
hun. = _____ tens = _____
- 5 hundreds + 4 tens = _____
- $5 + 5 + 5 =$ _____
- Which is heavier?
Pencil or Book

Tuesday

- $32 + 7 =$ _____
- $35 - 10 =$ _____
- Write in words - 72
- $22 + \underline{\quad} = 30$
- Days in 3 weeks? _____
- Name the shape?

- How many hundreds & tens in 480
hun. = _____ tens = _____
- 3 hundreds + 9 tens = _____
- $3 + 10 + 7 =$ _____
- Which is lighter?
Teddy or Chair

Week 1

Monday


- $19 + 5 =$ _____
- $14 - 10 =$ _____
- Write eighty five
- 5th month of the year? _____
- 8 more than 17 = _____
- 7 less than 27 = _____
- How many tens & ones in 65
tens = _____ ones = _____
- 4 tens + 6 ones = _____
- $5 + 5 + 10 =$ _____
- 8, 10, 12, _____

Tuesday


- $26 + 10 =$ _____
- $25 - 5 =$ _____
- Write sixty two
- 8th month of the year? _____
- 10 more than 4 = _____
- 10 less than 30 = _____
- How many tens & ones in 33
tens = _____ ones = _____
- 9 tens + 2 ones = _____
- $10 + 10 + 10 =$ _____
- 12, 13, 14, _____

Week 7


Monday

- $27 + 7 =$ _____
- $35 - 7 =$ _____
- Write in words - 58
- $20 + \underline{\quad} = 30$
- 1 minute = _____ secs.
- Name the shape?

- How many hundreds & tens in 740
hun. = _____ tens = _____
- 4 hundreds + 8 tens = _____
- $4 + 16 + 10 =$ _____
- Which is heavier?
Car or Truck


Tuesday

- $25 + 10 =$ _____
- $39 - 9 =$ _____
- Write in words - 36
- $32 + \underline{\quad} = 40$
- 2 minutes = _____ secs.
- Name the shape?

- How many hundreds & tens in 660
hun. = _____ tens = _____
- 2 hundreds + 6 tens = _____
- $20 + 5 + 6 =$ _____
- Which is lighter?
Plate or Tissue

Wednesday

- $18 + 7 =$ _____
- $18 - 10 =$ _____
- Write in words - 21
- $18 + \underline{\quad} = 26$
- 3 minutes = _____ secs.
- Name the shape?

- How many hundreds & tens in 850
hun. = _____ tens = _____
- 3 hundreds + _____ tens = _____
- $10 + \underline{\quad} + 6 =$ _____
- Which is lighter?
Puppy or Tiger

Thursday

- $8 + 6 =$ _____
- $21 - 10 =$ _____
- Write in words - 98
- $11 + \underline{\quad} = 20$
- 4 minutes = _____ secs.
- Name the shape?

- _____
- _____
- _____
- _____

Grade 2