

Mental Maths





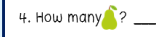


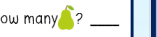
Includes:

- 10 weeks of daily mental maths
- Answer sheets
- Variety of mathematical concepts





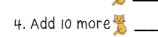
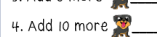
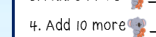
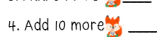
Mathematical concepts:

- Addition
- Subtraction
- Writing numbers
- Numbers before & after
- Number patterns
- Picture subtraction
- Adding by 5 & 10
- Shapes
- Odd & even numbers





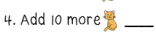



Week 1 Mental Maths

Monday	Tuesday	Wednesday	Thursday
1. $9 + 4 =$ _____	1. $8 + 7 =$ _____	1. $12 + 6 =$ _____	1. $8 + 8 =$ _____
2. $11 - 4 =$ _____	2. $16 - 6 =$ _____	2. $13 - 5 =$ _____	2. $19 - 7 =$ _____
3. How many  ? _____	3. How many  ? _____	3. How many  ? _____	3. How many  ? _____
4. How many  ? _____	4. How many  ? _____	4. How many  ? _____	4. How many  ? _____
5. How many altogether? _____	5. How many altogether? _____	5. How many altogether? _____	5. How many altogether? _____

Week 6 Mental Maths

Monday	Tuesday	Wednesday	Thursday
1. $18 + 5 =$ _____	1. $22 + 6 =$ _____	1. $8 + 6 =$ _____	1. $13 + 7 =$ _____
2. $12 - 5 =$ _____	2. $19 - 5 =$ _____	2. $16 - 5 =$ _____	2. $9 - 3 =$ _____
3. Add 5 more  _____	3. Add 5 more  _____	3. Add 5 more  _____	3. Add 5 more  _____
4. Add 10 more  _____	4. Add 10 more  _____	4. Add 10 more  _____	4. Add 10 more  _____
5. Draw an oval	5. Draw a rectangle	5. Draw a square	5. Draw a circle

Week 10 Mental Maths

Monday	Tuesday	Wednesday	Thursday
1. $10 + 10 =$ _____	1. $20 + 10 =$ _____	1. $11 + 8 =$ _____	1. $35 + 5 =$ _____
2. $20 - 6 =$ _____	2. $12 - 6 =$ _____	2. $18 - 10 =$ _____	2. $17 - 7 =$ _____
3. Add 5 more  _____	3. Add 5 more  _____	3. Add 5 more  _____	3. Add 5 more  _____
4. Add 10 more  _____	4. Add 10 more  _____	4. Add 10 more  _____	4. Add 10 more  _____
5. Draw a pentagon	5. Draw an oval	5. Draw a heart	5. Draw a star
6. Write the number twenty six _____	6. Write the number eighteen _____	6. Write the number thirty two _____	6. Write the number seven _____
7. What comes before 53? _____	7. What comes after 37? _____	7. What comes before 28? _____	7. What comes after 44? _____
8. 15, 16, ____, 18, 19	8. 41, 42, ____, 44, 45	8. 38, 39, ____, 41, 42	8. 25, 26, ____, 28, 29
9. 20 plus 10 = _____	9. 11 minus 4 = _____	9. 18 plus 5 = _____	9. 15 minus 5 = _____
10. Circle odd numbers 11 14 18 9 2 3	10. Circle even numbers 12 4 13 11 10 2	10. Circle odd numbers 15 13 6 4 1 12	10. Circle even numbers 18 19 13 14 8 1


Mental Maths

Monday

1. $9 + 4 = \underline{\quad}$

2. $11 - 4 = \underline{\quad}$



3. How many ? $\underline{\quad}$

4. How many ? $\underline{\quad}$

5. How many altogether? $\underline{\quad}$

6. Write the number nine $\underline{\quad}$

7. What comes before 33? $\underline{\quad}$

8. 2, 3, 4, $\underline{\quad}$, 6, 7, 8




9. Cross out half the puppies. How many left? $\underline{\quad}$

Tuesday

1. $8 + 7 = \underline{\quad}$

2. $16 - 6 = \underline{\quad}$



3. How many ? $\underline{\quad}$

4. How many ? $\underline{\quad}$

5. How many altogether? $\underline{\quad}$

6. Write the number thirteen $\underline{\quad}$

7. What comes after 26? $\underline{\quad}$

8. 5, 6, $\underline{\quad}$, 8, 9, 10




9. Cross out four puppies. How many left? $\underline{\quad}$

Wednesday

1. $12 + 6 = \underline{\quad}$

2. $13 - 5 = \underline{\quad}$



3. How many ? $\underline{\quad}$

4. How many ? $\underline{\quad}$

5. How many altogether? $\underline{\quad}$

6. Write the number eleven $\underline{\quad}$

7. What comes before 39? $\underline{\quad}$

8. 10, 11, $\underline{\quad}$, 13, 14




9. Cross out seven puppies. How many left? $\underline{\quad}$

Thursday

1. $8 + 8 = \underline{\quad}$

2. $19 - 7 = \underline{\quad}$



3. How many ? $\underline{\quad}$

4. How many ? $\underline{\quad}$

5. How many altogether? $\underline{\quad}$

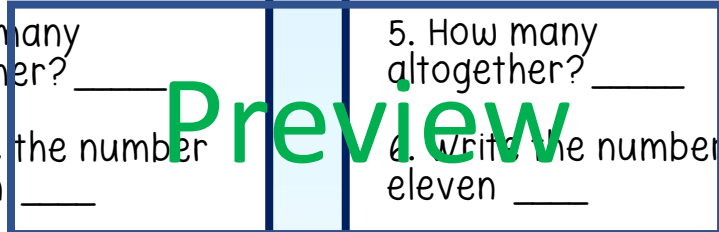
6. Write the number twenty $\underline{\quad}$

7. What comes after 43? $\underline{\quad}$

8. 19, 20, $\underline{\quad}$, 22, 23



9. Cross out eight puppies. How many left? $\underline{\quad}$




Mental Maths

Monday

1. $8 + 6 =$ _____

2. $19 - 8 =$ _____



3. How many ? _____

4. How many ? _____

5. How many altogether? _____

6. Write the number seventeen _____

7. What comes before 16? _____

8. 13, 14, _____, 16, 17, 18




9. Cross out two puppies. How many left? _____

Tuesday

1. $11 + 5 =$ _____

2. $18 - 5 =$ _____



3. How many ? _____

4. How many ? _____

5. How many altogether? _____

6. Write the number five _____

7. What comes after 33? _____

8. 31, 32, _____, 34, 35




9. Cross out nine puppies. How many left? _____

Wednesday

1. $6 + 13 =$ _____

2. $9 - 7 =$ _____



3. How many ? _____

4. How many ? _____

5. How many altogether? _____

6. Write the number ten _____

7. What comes before 22? _____

8. 8, 9, _____, 11, 12



9. Cross out three puppies. How many left? _____

Thursday

1. $7 + 7 =$ _____

2. $15 - 6 =$ _____



3. How many ? _____


4. How many ? _____

5. How many altogether? _____

6. Write the number sixteen _____

7. What comes after 27? _____

8. 23, 24, _____, 26, 27



9. Cross out one puppies. How many left? _____

Preview


Mental Maths

Monday

1. $13 + 5 = \underline{\quad}$

2. $15 - 5 = \underline{\quad}$



3. How many ? $\underline{\quad}$


4. How many ? $\underline{\quad}$

5. How many altogether? $\underline{\quad}$

6. Write the number fourteen $\underline{\quad}$

7. What comes before 20? $\underline{\quad}$

8. 10, $\underline{\quad}$, 12, 13, 14




9. Cross out three puppies. How many left? $\underline{\quad}$

Tuesday

1. $4 + 6 = \underline{\quad}$

2. $12 - 6 = \underline{\quad}$



3. How many ? $\underline{\quad}$

4. How many ? $\underline{\quad}$

5. How many altogether? $\underline{\quad}$

6. Write the number nine $\underline{\quad}$

7. What comes after 27? $\underline{\quad}$

8. 19, $\underline{\quad}$, 21, 22, 23




9. Cross out eight puppies. How many left? $\underline{\quad}$

Wednesday

1. $14 + 4 = \underline{\quad}$

2. $14 - 5 = \underline{\quad}$



3. How many ? $\underline{\quad}$

4. How many ? $\underline{\quad}$

5. How many altogether? $\underline{\quad}$

6. Write the number twelve $\underline{\quad}$

7. What comes before 19? $\underline{\quad}$

8. 3, $\underline{\quad}$, 5, 6, 7, 8



9. Cross out two puppies. How many left? $\underline{\quad}$


Thursday

1. $9 + 6 = \underline{\quad}$

2. $9 - 4 = \underline{\quad}$



3. How many ? $\underline{\quad}$


4. How many ? $\underline{\quad}$

5. How many altogether? $\underline{\quad}$

6. Write the number seventeen $\underline{\quad}$

7. What comes after 36? $\underline{\quad}$

8. 32, $\underline{\quad}$, 34, 35



9. Cross out five puppies. How many left? $\underline{\quad}$

Preview


Mental Maths

Monday

1. $15 + 5 = \underline{\quad}$

2. $18 - 4 = \underline{\quad}$



3. How many ? $\underline{\quad}$

4. How many ? $\underline{\quad}$

5. How many altogether? $\underline{\quad}$

6. Write the number fifteen $\underline{\quad}$

7. What comes before 36? $\underline{\quad}$

8. 25, 26, $\underline{\quad}$, 28, 29



9. Cross out two puppies. How many left? $\underline{\quad}$

Tuesday

1. $9 + 7 = \underline{\quad}$

2. $10 - 5 = \underline{\quad}$



3. How many ? $\underline{\quad}$


4. How many ? $\underline{\quad}$

5. How many altogether? $\underline{\quad}$

6. Write the number seven $\underline{\quad}$

7. What comes after 41? $\underline{\quad}$

8. 30, 31, $\underline{\quad}$, 33, 34




9. Cross out six puppies. How many left? $\underline{\quad}$

Wednesday

1. $11 + 6 = \underline{\quad}$

2. $19 - 7 = \underline{\quad}$



3. How many ? $\underline{\quad}$

4. How many ? $\underline{\quad}$

5. How many altogether? $\underline{\quad}$

6. Write the number eleven $\underline{\quad}$

7. What comes before 28? $\underline{\quad}$

8. 2, 3, $\underline{\quad}$, 5, 6, 7



9. Cross out one puppy. How many left? $\underline{\quad}$


Thursday

1. $6 + 6 = \underline{\quad}$

2. $8 - 5 = \underline{\quad}$



3. How many ? $\underline{\quad}$

4. How many ? $\underline{\quad}$

5. How many altogether? $\underline{\quad}$

6. Write the number eighteen $\underline{\quad}$

7. What comes after 39? $\underline{\quad}$

8. 17, 18, $\underline{\quad}$, 20, 21



9. Cross out four puppies. How many left? $\underline{\quad}$

Preview


Mental Maths

Monday

1. $12 + 7 = \underline{\quad}$

2. $18 - 9 = \underline{\quad}$



3. How many ? $\underline{\quad}$


4. How many ? $\underline{\quad}$

5. How many altogether? $\underline{\quad}$

6. Write the number thirteen $\underline{\quad}$

7. What comes before 32? $\underline{\quad}$

8. 51, 52, 53, $\underline{\quad}$, 55



9. Cross out three puppies. How many left? $\underline{\quad}$

Tuesday

1. $11 + 6 = \underline{\quad}$

2. $16 - 8 = \underline{\quad}$



3. How many ? $\underline{\quad}$


4. How many ? $\underline{\quad}$

5. How many altogether? $\underline{\quad}$

6. Write the number twenty $\underline{\quad}$

7. What comes after 21? $\underline{\quad}$

8. 13, 14, $\underline{\quad}$, 16, 17, 18




9. Cross out four puppies. How many left? $\underline{\quad}$

Wednesday

1. $13 + 7 = \underline{\quad}$

2. $19 - 4 = \underline{\quad}$



3. How many ? $\underline{\quad}$

4. How many ? $\underline{\quad}$

5. How many altogether? $\underline{\quad}$

6. Write the number twelve $\underline{\quad}$

7. What comes before 55? $\underline{\quad}$

8. 44, 45, $\underline{\quad}$, 47, 48




9. Cross out seven puppy. How many left? $\underline{\quad}$


Thursday

1. $9 + 5 = \underline{\quad}$

2. $15 - 4 = \underline{\quad}$



3. How many ? $\underline{\quad}$

4. How many ? $\underline{\quad}$

5. How many altogether? $\underline{\quad}$

6. Write the number fourteen $\underline{\quad}$

7. What comes after 61? $\underline{\quad}$

8. 27, 28, $\underline{\quad}$, 30, 31



9. Cross out six puppies. How many left? $\underline{\quad}$

Preview


Mental Maths


Monday

1. $18 + 5 = \underline{\quad}$

2. $12 - 5 = \underline{\quad}$



3. Add 5 more  $\underline{\quad}$

4. Add 10 more  $\underline{\quad}$

5. Draw an oval

6. Write the number twenty two $\underline{\quad}$

7. What comes before 45? $\underline{\quad}$

8. 36, 37, $\underline{\quad}$, 39, 40, 41

9. 10 plus 10 = $\underline{\quad}$

10. Circle odd numbers


2 3 7 4 6 9


Tuesday

1. $22 + 6 = \underline{\quad}$

2. $19 - 5 = \underline{\quad}$



3. Add 5 more  $\underline{\quad}$

4. Add 10 more  $\underline{\quad}$

5. Draw a rectangle

6. Write the number thirty $\underline{\quad}$

7. What comes after 17? $\underline{\quad}$

8. 13, 14, $\underline{\quad}$, 16, 17, 18

9. 13 minus 5 = $\underline{\quad}$

10. Circle even numbers

4 1 5 6 8 10


Wednesday

1. $8 + 6 = \underline{\quad}$

2. $16 - 5 = \underline{\quad}$



3. Add 5 more  $\underline{\quad}$

4. Add 10 more  $\underline{\quad}$

5. Draw a square

6. Write the number twenty six $\underline{\quad}$

7. What comes before 50? $\underline{\quad}$

8. 41, 42, $\underline{\quad}$, 44, 45

9. 20 plus 10 = $\underline{\quad}$

10. Circle odd numbers


8 7 6 5 4 3


Thursday

1. $13 + 7 = \underline{\quad}$

2. $9 - 3 = \underline{\quad}$



3. Add 5 more  $\underline{\quad}$

4. Add 10 more  $\underline{\quad}$

5. Draw a circle

6. Write the number sixteen $\underline{\quad}$

7. What comes after 33? $\underline{\quad}$

8. 50, 51, $\underline{\quad}$, 53, 54, 55

9. 20 minus 10 = $\underline{\quad}$

10. Circle even numbers

2 3 9 11 14 10

Preview


Mental Maths


Monday

1. $22 + 7 = \underline{\quad}$

2. $12 - 5 = \underline{\quad}$



3. Add 5 more  $\underline{\quad}$

4. Add 10 more  $\underline{\quad}$

5. Draw a star

6. Write the number thirty five $\underline{\quad}$

7. What comes before 18? $\underline{\quad}$

8. 17, 18, $\underline{\quad}$, 20, 21

9. 8 plus 8 = $\underline{\quad}$

10. Circle odd numbers


12 13 15 17 18


Tuesday

1. $21 + 8 = \underline{\quad}$

2. $19 - 7 = \underline{\quad}$



3. Add 5 more  $\underline{\quad}$

4. Add 10 more  $\underline{\quad}$

5. Draw a pentagon

6. Write the number twenty one $\underline{\quad}$

7. What comes after 55? $\underline{\quad}$

8. 33, 34, $\underline{\quad}$, 36, 37, 38

9. 15 minus 6 = $\underline{\quad}$

10. Circle even numbers

9 4 11 8 14 13


Wednesday

1. $32 + 6 = \underline{\quad}$

2. $24 - 6 = \underline{\quad}$



3. Add 5 more  $\underline{\quad}$

4. Add 10 more  $\underline{\quad}$

5. Draw a triangle

6. Write the number eleven $\underline{\quad}$

7. What comes before 42? $\underline{\quad}$

8. 54, 55, $\underline{\quad}$, 57, 58

9. 10 plus 8 = $\underline{\quad}$

10. Circle odd numbers


8 3 2 1 10 11


Thursday

1. $10 + 9 = \underline{\quad}$

2. $11 - 6 = \underline{\quad}$



3. Add 5 more  $\underline{\quad}$

4. Add 10 more  $\underline{\quad}$

5. Draw an oval

6. Write the number twenty five $\underline{\quad}$

7. What comes after 45? $\underline{\quad}$

8. 22, 23, $\underline{\quad}$, 25, 26

9. 13 minus 5 = $\underline{\quad}$

10. Circle even numbers

15 16 7 5 11 14


Preview


Mental Maths


Monday

1. $14 + 6 = \underline{\quad}$

2. $15 - 6 = \underline{\quad}$



3. Add 5 more  $\underline{\quad}$

4. Add 10 more  $\underline{\quad}$

5. Draw a heart

6. Write the number twenty six $\underline{\quad}$

7. What comes before 23? $\underline{\quad}$

8. 25, 26, $\underline{\quad}$, 28, 29

9. 10 plus 5 = $\underline{\quad}$

10. Circle odd numbers

10 14 12 13 19


Tuesday

1. $25 + 5 = \underline{\quad}$

2. $25 - 5 = \underline{\quad}$



3. Add 5 more  $\underline{\quad}$

4. Add 10 more  $\underline{\quad}$

5. Draw a rectangle

6. Write the number thirty three $\underline{\quad}$

7. What comes after 36? $\underline{\quad}$

8. 31, $\underline{\quad}$, 33, 34, 35

9. 25 minus 9 = $\underline{\quad}$

10. Circle even numbers

6 5 12 8 11 17


Wednesday

1. $22 + 7 = \underline{\quad}$

2. $18 - 6 = \underline{\quad}$



3. Add 5 more  $\underline{\quad}$

4. Add 10 more  $\underline{\quad}$

5. Draw a square

6. Write the number fifteen $\underline{\quad}$

7. What comes before 40? $\underline{\quad}$

8. 50, 51, $\underline{\quad}$, 53, 54

9. 20 plus 8 = $\underline{\quad}$

10. Circle odd numbers


7 3 6 11 8 13


Thursday

1. $13 + 8 = \underline{\quad}$

2. $14 - 7 = \underline{\quad}$



3. Add 5 more  $\underline{\quad}$

4. Add 10 more  $\underline{\quad}$

5. Draw a pentagon

6. Write the number twenty seven $\underline{\quad}$

7. What comes after 52? $\underline{\quad}$

8. 17, 18, $\underline{\quad}$, 20, 21

9. 14 minus 6 = $\underline{\quad}$

10. Circle even numbers

8 14 7 9 11 12

Preview


Mental Maths


Monday

1. $9 + 9 =$ _____

2. $18 - 4 =$ _____



3. Add 5 more  _____

4. Add 10 more  _____

5. Draw a square

6. Write the number thirty five _____

7. What comes before 44? _____

8. 31, 32, _____, 34, 35

9. 12 plus 7 = _____

10. Circle odd numbers

7 15 3 6 8 9


Tuesday

1. $23 + 7 =$ _____

2. $35 - 5 =$ _____



3. Add 5 more  _____

4. Add 10 more  _____

5. Draw a star

6. Write the number fifteen _____

7. What comes after 23? _____

8. 14, 15, _____, 17, 18

9. 20 minus 5 = _____

10. Circle even numbers


13 4 12 10 7


Wednesday

1. $20 + 10 =$ _____

2. $27 - 6 =$ _____



3. Add 5 more  _____

4. Add 10 more  _____

5. Draw a pentagon

6. Write the number twenty nine _____

7. What comes before 17? _____

8. 47, 48, _____, 50, 51

9. 6 plus 6 = _____

10. Circle odd numbers


1 6 8 11 13 10


Thursday

1. $7 + 7 =$ _____

2. $15 - 6 =$ _____



3. Add 5 more  _____

4. Add 10 more  _____

5. Draw a triangle

6. Write the number twelve _____

7. What comes after 49? _____

8. 22, 23, _____, 25, 26

9. 10 minus 8 = _____


10. Circle even numbers



14 15 11 8 18 1

Preview

Mental Maths


Monday



- $10 + 10 = \underline{\quad}$
- $20 - 6 = \underline{\quad}$
- 

Add 5 more  $\underline{\quad}$
- 

Add 10 more $\underline{\quad}$
- Draw a pentagon
- Write the number twenty six $\underline{\quad}$
- What comes before 53? $\underline{\quad}$
- 15, 16, $\underline{\quad}$, 18, 19
- 20 plus 10 = $\underline{\quad}$
- Circle odd numbers
11 14 18 9 2 3


Tuesday



- $20 + 10 = \underline{\quad}$
- $12 - 6 = \underline{\quad}$
- 

Add 5 more  $\underline{\quad}$
- 

Add 10 more $\underline{\quad}$
- Draw an oval
- Write the number eighteen $\underline{\quad}$
- What comes after 37? $\underline{\quad}$
- 41, 42, $\underline{\quad}$, 44, 45
- 11 minus 4 = $\underline{\quad}$
- Circle even numbers
12 4 13 11 10 2


Wednesday



- $11 + 8 = \underline{\quad}$
- $18 - 10 = \underline{\quad}$
- 

Add 5 more  $\underline{\quad}$
- 

Add 10 more $\underline{\quad}$
- Draw a heart
- Write the number thirty two $\underline{\quad}$
- What comes before 28? $\underline{\quad}$
- 38, 39, $\underline{\quad}$, 41, 42
- 18 plus 5 = $\underline{\quad}$
- Circle odd numbers
15 13 6 4 1 12

Thursday

- $35 + 5 = \underline{\quad}$
- $17 - 7 = \underline{\quad}$
- 

Add 5 more  $\underline{\quad}$
- 

Add 10 more $\underline{\quad}$
- Draw a star
- Write the number seven $\underline{\quad}$
- What comes after 44? $\underline{\quad}$
- 25, 26, $\underline{\quad}$, 28, 29
- 15 minus 5 = $\underline{\quad}$
- Circle even numbers
18 19 13 14 8 1

Preview

Mental Maths

Monday

1. $9 + 4 = 13$

2. $11 - 4 = 7$



3. How many ? 3

4. How many ? 3

5. How many altogether? 6

6. Write the number nine - 9

7. What comes before 33? 32

8. 2, 3, 4, 5, 6, 7, 8



9. Cross out half the puppies. How many left? 5

Tuesday

1. $8 + 7 = 15$

2. $16 - 6 = 10$



3. How many ? 4

4. How many ? 1

5. How many altogether? 5

6. Write the number thirteen - 13

7. What comes after 26? 27

8. 5, 6, 7, 8, 9, 10



9. Cross out four puppies. How many left? 6

Wednesday

1. $12 + 6 = 18$

2. $13 - 5 = 8$



3. How many ? 1

4. How many ? 3

5. How many altogether? 4

6. Write the number eleven - 11

7. What comes before 39? 38

8. 10, 11, 12, 13, 14




9. Cross out seven puppies. How many left? 3

Thursday

1. $8 + 8 = 16$

2. $19 - 7 = 12$



3. How many ? 1

4. How many ? 5

5. How many altogether? 6

6. Write the number twenty - 20

7. What comes after 43? 44

8. 19, 20, 21, 22, 23



9. Cross out eight puppies. How many left? 2

Preview

Mental Maths

Monday

1. $8 + 6 = 14$

2. $19 - 8 = 11$



3. How many ? 4

4. How many ? 2

5. How many altogether? 6

6. Write the number seventeen - 17

7. What comes before 16? 15

8. 13, 14, 15, 16, 17, 18



9. Cross out two puppies. How many left? 8

Tuesday

1. $11 + 5 = 16$

2. $18 - 5 = 13$



3. How many ? 3

4. How many ? 2

5. How many altogether? 5

6. Write the number five - 5

7. What comes after 33? 34

8. 31, 32, 33, 34, 35




9. Cross out nine puppies. How many left? 1


Wednesday

1. $6 + 13 = 19$

2. $9 - 7 = 2$



3. How many ? 3

4. How many ? 3

5. How many altogether? 6

6. Write the number ten - 10

7. What comes before 22? 21

8. 8, 9, 10, 11, 12




9. Cross out three puppies. How many left? 7


Thursday

1. $7 + 7 = 14$

2. $15 - 6 = 9$



3. How many ? 1


4. How many ? 3

5. How many altogether? 4

6. Write the number sixteen - 16

7. What comes after 27? 28

8. 23, 24, 25, 26, 27



9. Cross out one puppies. How many left? 9

Preview


Mental Maths


Monday

1. $13 + 5 = 18$

2. $15 - 5 = 10$



3. How many ? 2

4. How many ? 2

5. How many altogether? 4

6. Write the number fourteen - 14

7. What comes before 20? 19

8. 10, 11, 12, 13, 14



9. Cross out three puppies. How many left? 7


Tuesday

1. $4 + 6 = 10$

2. $12 - 6 = 6$



3. How many ? 2

4. How many ? 3

5. How many altogether? 5

6. Write the number nine - 9

7. What comes after 27? 28

8. 19, 20, 21, 22, 23




9. Cross out eight puppies. How many left? 2

Wednesday

1. $14 + 4 = 18$

2. $14 - 5 = 9$



3. How many ? 5

4. How many ? 1

5. How many altogether? 6

6. Write the number twelve - 12

7. What comes before 19? 18

8. 3, 4, 5, 6, 7, 8



9. Cross out two puppies. How many left? 8

Thursday

1. $9 + 6 = 15$

2. $9 - 4 = 5$



3. How many ? 2

4. How many ? 3

5. How many altogether? 5

6. Write the number seventeen - 17

7. What comes after 36? 37

8. 32, 33, 34, 35



9. Cross out five puppies. How many left? 5

Preview

Mental Maths


Monday

1. $15 + 5 = 20$

2. $18 - 4 = 14$



3. How many ? 4

4. How many ? 2

5. How many altogether? 6

6. Write the number fifteen - 15

7. What comes before 36? 35

8. 25, 26, 27, 28, 29




9. Cross out two puppies. How many left? 8


Tuesday

1. $9 + 7 = 16$

2. $10 - 5 = 5$



3. How many ? 1

4. How many ? 4

5. How many altogether? 5

6. Write the number seven - 7

7. What comes after 41? 42

8. 30, 31, 32, 33, 34




9. Cross out six puppies. How many left? 4

Wednesday

1. $11 + 6 = 17$

2. $19 - 7 = 12$



3. How many ? 3


4. How many ? 1

5. How many altogether? 4

6. Write the number eleven - 11

7. What comes before 28? 27

8. 2, 3, 4, 5, 6, 7




9. Cross out one puppy. How many left? 9

Thursday

1. $6 + 6 = 12$

2. $8 - 5 = 3$



3. How many ? 2

4. How many ? 4

5. How many altogether? 6

6. Write the number eighteen - 18

7. What comes after 39? 40

8. 17, 18, 19, 20, 21



9. Cross out four puppies. How many left? 6

Preview

Mental Maths

Monday

1. $12 + 7 = 19$

2. $18 - 9 = 9$



3. How many ? 5

4. How many ? 1

5. How many altogether? 6

6. Write the number thirteen - 13

7. What comes before 32? 31

8. 51, 52, 53, 54, 55, 56



9. Cross out three puppies. How many left? 7

Tuesday

1. $11 + 6 = 17$

2. $16 - 8 = 8$



3. How many ? 3

4. How many ? 3

5. How many altogether? 6

6. Write the number twenty - 13

7. What comes after 21? 22

8. 13, 14, 15, 16, 17, 18



9. Cross out four puppies. How many left? 6

Wednesday

1. $13 + 7 = 20$

2. $19 - 4 = 15$



3. How many ? 2

4. How many ? 4

5. How many altogether? 6

6. Write the number twelve - 12

7. What comes before 55? 54

8. 44, 45, 46, 47, 48



9. Cross out seven puppies. How many left? 3


Thursday

1. $9 + 5 = 14$

2. $15 - 4 = 11$



3. How many ? 3

4. How many ? 2

5. How many altogether? 5

6. Write the number fourteen - 14

7. What comes after 61? 62

8. 27, 28, 29, 30, 31



9. Cross out six puppies. How many left? 4

Preview


Mental Maths


Monday

1. $18 + 5 = 23$


2. $12 - 5 = 7$



3. Add 5 more  11

4. Add 10 more  16

5. Draw an oval



6. Write the number twenty two - 22

7. What comes before 45? 44

8. 36, 37, 38, 39, 40, 41

9. 10 plus 10 = 20

10. Circle odd numbers


2 **3** **7** 4 6 **9**


Tuesday

1. $22 + 6 = 28$

2. $19 - 5 = 14$



3. Add 5 more  10

4. Add 10 more  15

5. Draw a rectangle



6. Write the number thirty - 30

7. What comes after 17? 18

8. 13, 14, 15, 16, 17, 18

9. 13 minus 5 = 8

10. Circle even numbers


4 1 5 **6** **8** **10**


Wednesday

1. $8 + 6 = 14$

2. $16 - 5 = 11$



3. Add 5 more  8

4. Add 10 more  13

5. Draw a square



6. Write the number twenty six - 26

7. What comes before 50? 49

8. 41, 42, 43, 44, 45

9. 20 plus 10 = 30

10. Circle odd numbers


8 **7** 6 **5** 4 **3**


Thursday

1. $13 + 7 = 20$


2. $9 - 3 = 6$



3. Add 5 more  9

4. Add 10 more  14

5. Draw a circle



6. Write the number sixteen - 16

7. What comes after 33? 34

8. 50, 51, 52, 53, 54, 55

9. 20 minus 10 = 10

10. Circle even numbers

2 3 9 11 **14** **10**


Mental Maths


Monday

1. $22 + 7 = 29$

2. $12 - 5 = 7$



3. Add 5 more  9

4. Add 10 more  14

5. Draw a star



6. Write the number thirty five - 35

7. What comes before 18? 17

8. 17, 18, 19, 20, 21

9. 8 plus 8 = 16

10. Circle odd numbers


12 13 15 17 18


Tuesday

1. $21 + 8 = 29$

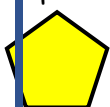
2. $19 - 7 = 12$



3. Add 5 more  9

4. Add 10 more  14

5. Draw a pentagon



6. Write the number twenty one - 21

7. What comes after 55? 56

8. 33, 34, 35, 36, 37, 38

9. 15 minus 6 = 9

10. Circle even numbers


9 4 11 8 14 13


Wednesday

1. $32 + 6 = 38$

2. $24 - 6 = 18$



3. Add 5 more  9

4. Add 10 more  14

5. Draw a triangle



6. Write the number eleven - 11

7. What comes before 42? 41

8. 54, 55, 56, 57, 58

9. 10 plus 8 = 18

10. Circle odd numbers


8 3 2 1 10 11


Thursday

1. $10 + 9 = 19$


2. $11 - 6 = 5$



3. Add 5 more  10

4. Add 10 more  15

5. Draw an oval



6. Write the number twenty five - 25

7. What comes after 45? 46

8. 22, 23, 24, 25, 26

9. 13 minus 5 = 8

10. Circle even numbers


15 16 7 5 11 14


Mental Maths


Monday

1. $14 + 6 = 20$

2. $15 - 6 = 9$



3. Add 5 more  11

4. Add 10 more  16

5. Draw a heart



6. Write the number twenty six - 26

7. What comes before 23? 22

8. 25, 26, 27, 28, 29

9. 10 plus 5 = 15

10. Circle odd numbers


10 14 12 **13** **19**


Tuesday

1. $25 + 5 = 30$

2. $25 - 5 = 20$



3. Add 5 more  8

4. Add 10 more  13

5. Draw a rectangle



6. Write the number thirty three - 33

7. What comes after 36? 37

8. 31, 32, 33, 34, 35

9. 25 minus 9 = 16

10. Circle even numbers


6 5 **12** **8** 11 17


Wednesday

1. $22 + 7 = 29$

2. $18 - 6 = 12$



3. Add 5 more  10

4. Add 10 more  15

5. Draw a square



6. Write the number fifteen - 15

7. What comes before 40? 39

8. 50, 51, 52, 53, 54

9. 20 plus 8 = 28

10. Circle odd numbers


7 **3** 6 **11** 8 **13**


Thursday

1. $13 + 8 = 24$

2. $14 - 7 = 7$



3. Add 5 more  9

4. Add 10 more  14

5. Draw a pentagon



6. Write the number twenty seven - 27

7. What comes after 52? 53

8. 17, 18, 19, 20, 21

9. 14 minus 6 = 8

10. Circle even numbers

8 **14** 7 9 11 **12**


Mental Maths


Monday

1. $9 + 9 = 18$

2. $18 - 4 = 14$



3. Add 5 more  8

4. Add 10 more  13

5. Draw a square



6. Write the number thirty five - 35

7. What comes before 44? 43

8. 31, 32, 33, 34, 35

9. 12 plus 7 = 19

10. Circle odd numbers


7 15 3 6 8 9


Tuesday

1. $23 + 7 = 30$

2. $35 - 5 = 30$



3. Add 5 more  9

4. Add 10 more  14

5. Draw a star



6. Write the number fifteen - 15

7. What comes after 23? 24

8. 14, 15, 16, 17, 18

9. 20 minus 5 = 15

10. Circle even numbers


13 4 12 10 7


Wednesday

1. $20 + 10 = 30$

2. $27 - 6 = 21$



3. Add 5 more  10

4. Add 10 more  15

5. Draw a pentagon



6. Write the number twenty nine - 29

7. What comes before 17? 16

8. 47, 48, 49, 50, 51

9. 6 plus 6 = 12

10. Circle odd numbers


1 6 8 11 13 10


Thursday

1. $7 + 7 = 14$


2. $15 - 6 = 9$



3. Add 5 more  10

4. Add 10 more  15

5. Draw a triangle



6. Write the number twelve - 12

7. What comes after 49? 50

8. 22, 23, 24, 25, 26

9. 10 minus 8 = 2

10. Circle even numbers

14 15 11 8 18 1


Mental Maths


Monday

1. $10 + 10 = 20$

2. $20 - 6 = 14$



3. Add 5 more  10

4. Add 10 more  15

5. Draw a pentagon



6. Write the number twenty six - 26

7. What comes before 53? 52

8. 15, 16, 17, 18, 19

9. 20 plus 10 = 30

10. Circle odd numbers


11 14 18 9 2 3


Tuesday

1. $20 + 10 = 30$


2. $12 - 6 = 6$



3. Add 5 more  8

4. Add 10 more  13

5. Draw an oval



6. Write the number eighteen - 18

7. What comes after 37? 38

8. 41, 42, 43, 44, 45

9. 11 minus 4 = 7

10. Circle even numbers


12 4 13 11 10 2


Wednesday

1. $11 + 8 = 19$

2. $18 - 10 = 8$



3. Add 5 more  9

4. Add 10 more  14

5. Draw a heart



6. Write the number thirty two - 32

7. What comes before 28? 27

8. 38, 39, 40, 41, 42

9. 18 plus 5 = 23

10. Circle odd numbers


15 13 6 4 1 12


Thursday

1. $35 + 5 = 40$

2. $17 - 7 = 10$



3. Add 5 more  8

4. Add 10 more  13

5. Draw a star



6. Write the number seven - 7

7. What comes after 44? 45

8. 25, 26, 27, 28, 29

9. 15 minus 5 = 20

10. Circle even numbers

18 19 13 14 8 1