

Mental Maths 2





Includes:

- 10 weeks of daily mental maths
- Answer sheets
- Variety of mathematical concepts


Mathematical concepts:

- Addition
- Subtraction
- Months
- Estimation
- Number patterns
- Writing numbers
- Adding by 10
- Shapes
- Odd & even numbers





Week 1 Mental Maths

<p style="text-align: center;">Monday</p> <p>1. $13 + 6 =$ _____</p> <p>2. $11 - 4 =$ _____</p> <p>3. Square – How many sides? _____</p> <p> 4. Double the _____</p> <p>5. Add 7 more _____</p> <p>6. Which is heavier? Truck <input type="checkbox"/> Car <input type="checkbox"/></p> <p>7. $2 + 2 + 2 =$ _____</p>	<p style="text-align: center;">Tuesday</p> <p>1. $12 + 8 =$ _____</p> <p>2. $15 - 6 =$ _____</p> <p>3. Triangle – How many sides? _____</p> <p> 4. Double the _____</p> <p>5. Add 7 more _____</p> <p>6. Which is longer? Finger <input type="checkbox"/> Paper <input type="checkbox"/></p> <p>7. $4 + 2 + 4 =$ _____</p>	<p style="text-align: center;">Wednesday</p> <p>1. $22 + 7 =$ _____</p> <p>2. $8 - 6 =$ _____</p> <p>3. Rectangle – How many sides? _____</p> <p> 4. Double the _____</p> <p>5. Add 7 more _____</p> <p>6. Which is heavier? Pencil <input type="checkbox"/> Book <input type="checkbox"/></p> <p>7. $5 + 5 + 5 =$ _____</p>	<p style="text-align: center;">Thursday</p> <p>1. $21 + 5 =$ _____</p> <p>2. $18 - 4 =$ _____</p> <p>3. Oval – How many sides? _____</p> <p> 4. Double the _____</p> <p>5. Add 7 more _____</p> <p>6. Which is longer? Arm <input type="checkbox"/> Pen <input type="checkbox"/></p> <p>7. $2 + 3 + 4 =$ _____</p> <p>8. 12, 13, _____, 15, 16</p> <p>9. Circle the largest 9 29 19 39 22</p> <p>10. Write the number sixteen _____</p>
--	---	---	--

Week 7 Mental Maths

<p style="text-align: center;">Monday</p> <p>1. $25 + 7 =$ _____</p> <p>2. $22 - 5 =$ _____</p> <p>3. Month after March _____</p> <p> 4. Add 5 more _____</p> <p>5. Add 7 more _____</p> <p>6. Is 11 odd or even? Odd <input type="checkbox"/> Even <input type="checkbox"/></p> <p>7. $10 + 10 =$ _____</p> <p>8. 14, 15, _____, 17, 18</p> <p>9. Circle the smallest 27 43 34 21 12</p> <p>10. Write the number forty three _____</p>	<p style="text-align: center;">Tuesday</p> <p>1. $14 + 6 =$ _____</p> <p>2. $13 - 4 =$ _____</p> <p>3. Month before February _____</p> <p>4. Add 3 _____</p> <p>5. Add 9 _____</p> <p>6. Is 8 odd or even? Odd <input type="checkbox"/> Even <input type="checkbox"/></p> <p>7. $50 + 10 =$ _____</p> <p>8. 25, 26, _____, 28, 29</p> <p>9. Circle 1 _____</p> <p>10. Write twenty six _____</p>	<p style="text-align: center;">Wednesday</p> <p>1. $21 + 8 =$ _____</p> <p>2. $20 - 5 =$ _____</p> <p>3. Month after November _____</p> <p>4. Add 8 more _____</p> <p>5. Add 9 more _____</p> <p>6. Is 16 odd or even? Odd <input type="checkbox"/> Even <input type="checkbox"/></p> <p>7. $20 + 10 =$ _____</p> <p>8. 24, 30, _____, 32, 33</p> <p>9. Circle the smallest 22 26 43 21 10</p> <p>10. Write the number forty one _____</p>	<p style="text-align: center;">Thursday</p> <p>1. $31 + 9 =$ _____</p> <p>2. $15 - 7 =$ _____</p> <p>3. Month before September _____</p> <p>4. Add 5 more _____</p> <p>5. Add 9 more _____</p> <p>6. Is 8 odd or even? Odd <input type="checkbox"/> Even <input type="checkbox"/></p> <p>7. $10 + 10 =$ _____</p> <p>8. 18, 19, _____, 21, 22</p> <p>9. Circle the smallest 41 43 45 51 50</p> <p>10. Write the number sixteen _____</p>
---	--	--	--

Week 10 Mental Maths



<p style="text-align: center;">Monday</p> <p>1. $15 + 10 =$ _____</p> <p>2. $16 - 5 =$ _____</p> <p>3. Month after February _____</p> <p> 4. Add 8 more _____</p> <p>5. Add 9 more _____</p> <p>6. Is 16 odd or even? Odd <input type="checkbox"/> Even <input type="checkbox"/></p> <p>7. $20 + 10 =$ _____</p> <p>8. 24, 30, _____, 32, 33</p> <p>9. Circle the smallest 22 26 43 21 10</p> <p>10. Write the number forty one _____</p>	<p style="text-align: center;">Tuesday</p> <p>1. $19 + 5 =$ _____</p> <p>2. $27 - 5 =$ _____</p> <p>3. Month before September _____</p> <p> 4. Add 5 more _____</p> <p>5. Add 9 more _____</p> <p>6. Is 8 odd or even? Odd <input type="checkbox"/> Even <input type="checkbox"/></p> <p>7. $10 + 10 =$ _____</p> <p>8. 18, 19, _____, 21, 22</p> <p>9. Circle the smallest 41 43 45 51 50</p> <p>10. Write the number sixteen _____</p>	<p style="text-align: center;">Wednesday</p> <p>1. $20 + 5 =$ _____</p> <p>2. $18 - 6 =$ _____</p> <p>3. Month after May _____</p> <p> 4. Add 3 more _____</p> <p>5. Add 6 more _____</p> <p>6. Is 14 odd or even? Odd <input type="checkbox"/> Even <input type="checkbox"/></p> <p>7. $50 + 10 =$ _____</p> <p>8. 36, 37, _____, 39, 40</p> <p>9. Circle the smallest 18 16 24 42 15</p> <p>10. Write the number twenty two _____</p>	<p style="text-align: center;">Thursday</p> <p>1. $36 + 4 =$ _____</p> <p>2. $26 - 4 =$ _____</p> <p>3. Month before December _____</p> <p> 4. Add 2 more _____</p> <p>5. Add 8 more _____</p> <p>6. Is 13 odd or even? Odd <input type="checkbox"/> Even <input type="checkbox"/></p> <p>7. $40 + 10 =$ _____</p> <p>8. 22, 23, _____, 25, 26</p> <p>9. Circle the smallest 35 42 32 29 16</p> <p>10. Write the number thirty five _____</p>
--	---	--	--

Mental Maths

Monday

- $13 + 6 = \underline{\quad}$
- $11 - 4 = \underline{\quad}$
- Square – How many sides? $\underline{\quad}$





- Double the  $\underline{\quad}$
- Add 7 more  $\underline{\quad}$
- Which is heavier?
Truck Car

- $2 + 2 + 2 = \underline{\quad}$
- 2, 3, 4, $\underline{\quad}$, 6, 7, 8
- Circle the largest
22 31 13 12 27
- Write the number fifty five $\underline{\quad}$

Tuesday

- $12 + 8 = \underline{\quad}$
- $15 - 6 = \underline{\quad}$
- Triangle – How many sides? $\underline{\quad}$






- Double the  $\underline{\quad}$
- Add 7 more  $\underline{\quad}$
- Which is longer?
Finger Paper

- $4 + 2 + 4 = \underline{\quad}$
- 34, 35, $\underline{\quad}$, 37, 38
- Circle the largest
18 44 34 43 4
- Write the number thirty two $\underline{\quad}$

Wednesday

- $22 + 7 = \underline{\quad}$
- $8 - 6 = \underline{\quad}$
- Rectangle – How many sides? $\underline{\quad}$





- Double the  $\underline{\quad}$
- Add 7 more  $\underline{\quad}$
- Which is heavier?
Pencil Book

- $5 + 5 + 5 = \underline{\quad}$
- 47, 48, $\underline{\quad}$, 50, 51
- Circle the largest
19 12 21 6 8 2
- Write the number twenty seven $\underline{\quad}$

Thursday

- $21 + 5 = \underline{\quad}$
- $18 - 4 = \underline{\quad}$
- Oval – How many sides? $\underline{\quad}$



- Double the  $\underline{\quad}$
- Add 7 more  $\underline{\quad}$
- Which is longer?
Arm Pen

- $2 + 3 + 4 = \underline{\quad}$
- 12, 13, $\underline{\quad}$, 15, 16
- Circle the largest
9 29 19 39 22
- Write the number sixteen $\underline{\quad}$



Preview

Mental Maths

Monday

- $16 + 7 = \underline{\quad}$
- $15 - 5 = \underline{\quad}$
- Pentagon – How many sides? $\underline{\quad}$





- Double the  $\underline{\quad}$
- Add 7 more  $\underline{\quad}$
- Which is heavier?
Tree Cat

- $3 + 3 + 3 = \underline{\quad}$
- 9, 10, $\underline{\quad}$, 12, 13
- Circle the largest
11 21 14 8 28 2
- Write the number twenty five $\underline{\quad}$

Tuesday

- $22 + 4 = \underline{\quad}$
- $21 - 5 = \underline{\quad}$
- Circle – How many sides? $\underline{\quad}$






- Double the  $\underline{\quad}$
- Add 7 more  $\underline{\quad}$
- Which is longer?
Bike Car

- $4 + 4 + 4 = \underline{\quad}$
- 22, 23, $\underline{\quad}$, 25, 26
- Circle the largest
57 42 23 43 13
- Write the number forty four $\underline{\quad}$

Wednesday

- $19 + 6 = \underline{\quad}$
- $13 - 4 = \underline{\quad}$
- Triangle – How many sides? $\underline{\quad}$





- Double the  $\underline{\quad}$
- Add 7 more  $\underline{\quad}$
- Which is heavier?
Plate Paper

- $2 + 2 + 4 = \underline{\quad}$
- 35, 36, $\underline{\quad}$, 38, 39
- Circle the largest
8 32 23 44 15
- Write the number eighteen $\underline{\quad}$

Thursday

- $26 + 4 = \underline{\quad}$
- $9 - 7 = \underline{\quad}$
- Hexagon – How many sides? $\underline{\quad}$



- Double the  $\underline{\quad}$
- Add 7 more  $\underline{\quad}$
- Which is longer?
Plant Ant

- $6 + 2 + 2 = \underline{\quad}$
- 51, 52, $\underline{\quad}$, 54, 55
- Circle the largest
8 4 2 14 31 9
- Write the number twenty nine $\underline{\quad}$



Preview

Mental Maths

Monday

- $26 + 6 = \underline{\quad}$
- $19 - 7 = \underline{\quad}$
- Hexagon – How many sides? $\underline{\quad}$





- Double the  $\underline{\quad}$
- Add 7 more  $\underline{\quad}$
- Which is heavier?
Cup Leaf

- $2 + 3 + 4 = \underline{\quad}$
- 13, 14, $\underline{\quad}$, 16, 17
- Circle the largest
24 14 33 44 4
- Write the number thirty seven $\underline{\quad}$

Tuesday

- $35 + 5 = \underline{\quad}$
- $13 - 6 = \underline{\quad}$
- Square – How many sides? $\underline{\quad}$






- Double the  $\underline{\quad}$
- Add 7 more  $\underline{\quad}$
- Which is longer?
Slide Finger

- $5 + 4 + 3 = \underline{\quad}$
- 29, 30, $\underline{\quad}$, 32, 33
- Circle the largest
15 35 25 44 50
- Write the number fifty four $\underline{\quad}$

Wednesday

- $42 + 8 = \underline{\quad}$
- $25 - 5 = \underline{\quad}$
- Oval – How many sides? $\underline{\quad}$





- Double the  $\underline{\quad}$
- Add 7 more  $\underline{\quad}$
- Which is heavier?
Boy Plane

- $3 + 3 + 3 = \underline{\quad}$
- 26, 27, $\underline{\quad}$, 29, 30
- Circle the largest
23 32 51 52 12
- Write the number twenty two $\underline{\quad}$

Thursday

- $32 + 7 = \underline{\quad}$
- $28 - 6 = \underline{\quad}$
- Triangle – How many sides? $\underline{\quad}$



- Double the  $\underline{\quad}$
- Add 7 more  $\underline{\quad}$
- Which is taller?
Girl House

- $5 + 2 + 4 = \underline{\quad}$
- 43, 44, $\underline{\quad}$, 46, 47
- Circle the largest
12 41 22 34 43
- Write the number thirty one $\underline{\quad}$



Preview

Mental Maths

Monday

- $17 + 7 = \underline{\quad}$
- $14 - 6 = \underline{\quad}$
- Pentagon – How many sides? $\underline{\quad}$





- Double the  $\underline{\quad}$
- Add 7 more  $\underline{\quad}$
- Which is taller?
Tree Rabbit

- $5 + 5 + 3 = \underline{\quad}$
- 28, 29, $\underline{\quad}$, 31, 32
- Circle the largest
34 66 38 14 9
- Write the number forty five $\underline{\quad}$

Tuesday

- $8 + 11 = \underline{\quad}$
- $28 - 8 = \underline{\quad}$
- Triangle – How many sides? $\underline{\quad}$






- Double the  $\underline{\quad}$
- Add 7 more  $\underline{\quad}$
- Which is longer?
Ruler Snake

- $3 + 5 + 3 = \underline{\quad}$
- 52, 53, $\underline{\quad}$, 55, 56
- Circle the largest
8 9 19 18 28 7
- Write the number thirty seven $\underline{\quad}$

Wednesday

- $13 + 5 = \underline{\quad}$
- $24 - 7 = \underline{\quad}$
- Rectangle – How many sides? $\underline{\quad}$





- Double the  $\underline{\quad}$
- Add 7 more  $\underline{\quad}$
- Which is heavier?
Cup Table

- $4 + 4 + 2 = \underline{\quad}$
- 19, 20, $\underline{\quad}$, 22, 23
- Circle the largest
52 35 15 33 8
- Write the number seventeen $\underline{\quad}$

Thursday

- $27 + 6 = \underline{\quad}$
- $12 - 5 = \underline{\quad}$
- Circle – How many sides? $\underline{\quad}$



- Double the  $\underline{\quad}$
- Add 7 more  $\underline{\quad}$
- Which is taller?
Pig Giraffe

- $2 + 2 + 2 = \underline{\quad}$
- 13, 14 $\underline{\quad}$, 16, 17
- Circle the largest
24 42 36 17 26
- Write the number twenty five $\underline{\quad}$



Preview

Mental Maths

Monday

- $28 + 5 = \underline{\quad}$
- $25 - 7 = \underline{\quad}$
- Oval – How many sides? $\underline{\quad}$





- Double the  $\underline{\quad}$
- Add 7 more  $\underline{\quad}$
- Which is longer?
Train Bike

- $3 + 3 + 3 = \underline{\quad}$
- 36, 37, $\underline{\quad}$, 39, 40
- Circle the largest
25 15 35 5 45
- Write the number twenty two $\underline{\quad}$

Tuesday

- $13 + 6 = \underline{\quad}$
- $34 - 6 = \underline{\quad}$
- Hexagon – How many sides? $\underline{\quad}$






- Double the  $\underline{\quad}$
- Add 7 more  $\underline{\quad}$
- Which is longer?
Worm Ant

- $4 + 5 + 2 = \underline{\quad}$
- 44, 45, $\underline{\quad}$, 47, 48
- Circle the largest
7 43 23 14 27
- Write the number forty five $\underline{\quad}$

Wednesday

- $20 + 10 = \underline{\quad}$
- $20 - 10 = \underline{\quad}$
- Square – How many sides? $\underline{\quad}$





- Double the  $\underline{\quad}$
- Add 7 more  $\underline{\quad}$
- Which is heavier?
Pig Mouse

- $3 + 4 + 5 = \underline{\quad}$
- 7, 8, $\underline{\quad}$, 10, 11
- Circle the largest
19 31 23 22 27
- Write the number thirty seven $\underline{\quad}$

Thursday

- $35 + 7 = \underline{\quad}$
- $19 - 8 = \underline{\quad}$
- Triangle – How many sides? $\underline{\quad}$



- Double the  $\underline{\quad}$
- Add 7 more  $\underline{\quad}$
- Who is taller?
Cat Dad

- $4 + 2 + 4 = \underline{\quad}$
- 22, 23, $\underline{\quad}$, 25, 26
- Circle the largest
29 45 31 13 32
- Write the number sixteen $\underline{\quad}$



Preview

Mental Maths

Monday

- $32 + 6 = \underline{\quad}$
- $15 - 6 = \underline{\quad}$
- Month after April






- Add 6 more  _____
- Add 9 more  _____
- Is 9 odd or even?
Odd Even

- $50 + 10 = \underline{\quad}$
- 2, 3, _____, 5, 6
- Circle the smallest
33 45 21 12 44
- Write the number seventeen _____

Tuesday

- $9 + 9 = \underline{\quad}$
- $18 - 5 = \underline{\quad}$
- Month before July






- Add 7 more  _____
- Add 8 more  _____
- Is 16 odd or even?
Odd Even

- $60 + 10 = \underline{\quad}$
- 19, 20, _____, 22, 23
- Circle the smallest
19 18 22 17 34
- Write the number fifty five _____

Wednesday

- $33 + 10 = \underline{\quad}$
- $22 - 10 = \underline{\quad}$
- Month after May



- Add 5 more  _____
- Add 7 more  _____
- Is 14 odd or even?
Odd Even

- $20 + 10 = \underline{\quad}$
- 45, 46, _____, 48, 49
- Circle the smallest
43 34 22 32 17
- Write the number eighteen _____

Thursday

- $15 + 8 = \underline{\quad}$
- $26 - 5 = \underline{\quad}$
- Month before June



- Add 6 more  _____
- Add 8 more  _____
- Is 20 odd or even?
Odd Even


- $70 + 10 = \underline{\quad}$
- 32, 33, _____, 35, 36
- Circle the smallest
15 5 21 34 8
- Write the number twenty two _____



Preview

Mental Maths

Monday


1. $25 + 7 =$ _____
2. $22 - 5 =$ _____
3. Month after March _____





4. Add 5 more  _____
5. Add 7 more  _____
6. Is 11 odd or even?
Odd Even
7. $10 + 10 =$ _____
8. 14, 15, _____, 17, 18
9. Circle the smallest
27 43 34 21 12
10. Write the number forty three _____

Tuesday


1. $14 + 6 =$ _____
2. $13 - 4 =$ _____
3. Month before February _____





4. Add 3 more  _____
5. Add 9 more  _____
6. Is 8 odd or even?
Odd Even
7. $50 + 10 =$ _____
8. 25, 26, _____, 28, 29
9. Circle the smallest
20 21 34 32 23
10. Write the number twenty six _____

Wednesday

1. $21 + 8 =$ _____
2. $20 - 5 =$ _____
3. Month after November _____





4. Add 6 more  _____
5. Add 8 more  _____
6. Is 19 odd or even?
Odd Even
7. $30 + 10 =$ _____
8. 37, 38, _____, 40, 41
9. Circle the smallest
32 34 43 17 19
10. Write the number fourteen _____

Thursday

1. $31 + 9 =$ _____
2. $15 - 7 =$ _____
3. Month before September _____



4. Add 2 more  _____
5. Add 7 more  _____
6. Is 12 odd or even?
Odd Even
7. $60 + 10 =$ _____
8. 19, 20, _____, 22, 23
9. Circle the smallest
20 30 15 25 35
10. Write the number eighteen _____



Preview

Mental Maths

Monday

- $13 + 6 = \underline{\quad}$
- $18 - 6 = \underline{\quad}$
- Month after July





- Add 2 more  _____
- Add 8 more  _____
- Is 13 odd or even?
Odd Even

- $60 + 10 = \underline{\quad}$
- 39, 40, , 42, 43
- Circle the smallest
51 34 12 32 41
- Write the number nineteen _____

Tuesday

- $19 + 5 = \underline{\quad}$
- $20 - 6 = \underline{\quad}$
- Month before April






- Add 5 more  _____
- Add 6 more  _____
- Is 4 odd or even?
Odd Even

- $80 + 10 = \underline{\quad}$
- 25, 26, , 28, 29
- Circle the smallest
42 23 19 33 11
- Write the number thirty five _____

Wednesday

- $25 + 6 = \underline{\quad}$
- $16 - 4 = \underline{\quad}$
- Month after March





- Add 3 more  _____
- Add 9 more  _____
- Is 15 odd or even?
Odd Even

- $20 + 10 = \underline{\quad}$
- 47, 48, , 50, 51
- Circle the smallest
25 32 24 37 41
- Write the number twenty eight _____

Thursday

- $18 + 6 = \underline{\quad}$
- $9 - 8 = \underline{\quad}$
- Month before June



- Add 5 more  _____
- Add 8 more  _____
- Is 6 odd or even?
Odd Even

- $10 + 10 = \underline{\quad}$
- 51, 52, , 54, 55
- Circle the smallest
31 35 34 42 51
- Write the number thirty one _____



Preview

Mental Maths

Monday

- $24 + 7 = \underline{\quad}$
- $8 - 5 = \underline{\quad}$
- Month after November






- Add 7 more 
- Add 9 more 
- Is 19 odd or even?
Odd Even

- $40 + 10 = \underline{\quad}$
- 20, 21, , 23, 24
- Circle the smallest
25 24 26 34 35
- Write the number thirty one

Tuesday

- $13 + 6 = \underline{\quad}$
- $19 - 7 = \underline{\quad}$
- Month before August






- Add 6 more 
- Add 8 more 
- Is 6 odd or even?
Odd Even

- $70 + 10 = \underline{\quad}$
- 38, 39, , 41, 42
- Circle the smallest
18 15 22 32 24
- Write the number forty six

Wednesday

- $18 + 5 = \underline{\quad}$
- $13 - 7 = \underline{\quad}$
- Month after April




- Add 2 more 
- Add 7 more 
- Is 11 odd or even?
Odd Even

- $30 + 10 = \underline{\quad}$
- 14, 15, , 17, 18
- Circle the smallest
35 45 44 51 31
- Write the number fifteen

Thursday

- $32 + 7 = \underline{\quad}$
- $20 - 6 = \underline{\quad}$
- Month before September



- Add 3 more 
- Add 6 more 
- Is 8 odd or even?
Odd Even


- $60 + 10 = \underline{\quad}$
- 43, 44, , 46, 47
- Circle the smallest
12 13 18 19 15
- Write the number twenty seven



Preview

Mental Maths

Monday

- $15 + 10 = \underline{\quad}$
- $16 - 5 = \underline{\quad}$
- Month after February





- Add 8 more 
- Add 9 more 
- Is 16 odd or even?
Odd Even

- $20 + 10 = \underline{\quad}$
- 29, 30, , 32, 33
- Circle the smallest
22 26 43 21 10
- Write the number forty one

Tuesday

- $19 + 5 = \underline{\quad}$
- $27 - 5 = \underline{\quad}$
- Month before September






- Add 5 more 
- Add 9 more 
- Is 8 odd or even?
Odd Even

- $10 + 10 = \underline{\quad}$
- 18, 19, , 21, 22
- Circle the smallest
41 43 45 51 50
- Write the number sixteen

Wednesday

- $20 + 5 = \underline{\quad}$
- $18 - 6 = \underline{\quad}$
- Month after May





- Add 3 more 
- Add 6 more 
- Is 14 odd or even?
Odd Even

- $50 + 10 = \underline{\quad}$
- 36, 37, , 39, 40
- Circle the smallest
18 16 24 42 15
- Write the number twenty two

Thursday

- $36 + 4 = \underline{\quad}$
- $26 - 4 = \underline{\quad}$
- Month before December



- Add 2 more 
- Add 8 more 
- Is 13 odd or even?
Odd Even

- $40 + 10 = \underline{\quad}$
- 22, 23, , 25, 26
- Circle the smallest
35 42 32 29 16
- Write the number thirty five



Preview

Mental Maths

Monday

- $13 + 6 = 19$
- $11 - 4 = 7$
- Square – How many sides? 4





- Double the  8
- Add 7 more  11
- Which is heavier?
Truck Car

- $2 + 2 + 2 = 6$
- 2, 3, 4, 5, 6, 7, 8
- Circle the largest
22 31 13 12 27
- Write the number fifty five - 55

Tuesday

- $12 + 8 = 20$
- $15 - 6 = 9$
- Triangle – How many sides? 3






- Double the  6
- Add 7 more  10
- Which is longer?
Finger Paper

- $4 + 2 + 4 = 10$
- 34, 35, 36, 37, 38
- Circle the largest
18 44 34 43 4
- Write the number thirty two - 32

Wednesday

- $22 + 7 = 29$
- $8 - 6 = 2$
- Rectangle – How many sides? 4





- Double the  8
- Add 7 more  11
- Which is heavier?
Pencil Book

- $5 + 5 + 5 = 15$
- 47, 48, 49, 50, 51
- Circle the largest
19 12 21 6 8 2
- Write the number twenty seven - 27

Thursday

- $21 + 5 = 26$
- $18 - 4 = 14$
- Oval – How many sides? 0



- Double the  6
- Add 7 more  10
- Which is longer?
Arm Pen

- $2 + 3 + 4 = 9$
- 12, 13, 14, 15, 16
- Circle the largest
9 29 19 39 22
- Write the number sixteen - 16

Preview

Mental Maths


Monday


1. $16 + 7 = 23$

2. $15 - 5 = 10$

3. Pentagon – How many sides? 5



4. Double the  6

5. Add 7 more  10

6. Which is heavier?
Tree Cat

7. $3 + 3 + 3 = 9$

8. 9, 10, 11, 12, 13

9. Circle the largest

11 21 14 8 **28** 2

10. Write the number twenty five - 25


Tuesday


1. $22 + 4 = 26$

2. $21 - 5 = 16$

3. Circle – How many sides? 0



4. Double the  8

5. Add 7 more  11

6. Which is longer?
Bike Car

7. $4 + 4 + 4 = 12$

8. 22, 23, 24, 25, 26

9. Circle the largest

57 42 23 43 13


10. Write the number forty four - 44

Wednesday

1. $19 + 6 = 25$

2. $13 - 4 = 9$

3. Triangle – How many sides? 3



4. Double the  4

5. Add 7 more  9

6. Which is heavier?
Plate Paper

7. $2 + 2 + 4 = 8$

8. 35, 36, 37, 38, 39

9. Circle the largest

8 32 23 **44** 15

10. Write the number eighteen - 18


Thursday


1. $26 + 4 = 30$

2. $9 - 7 = 2$

3. Hexagon – How many sides? 6



4. Double the  8

5. Add 7 more  11

6. Which is longer?
Plant Ant

7. $6 + 2 + 2 = 10$

8. 51, 52, 53, 54, 55

9. Circle the largest

8 4 2 14 **31** 9

10. Write the number twenty nine - 29

Preview

Mental Maths


Monday


1. $26 + 6 = 32$

2. $19 - 7 = 12$

3. Hexagon – How many sides? 6



4. Double the  4

5. Add 7 more  9

6. Which is heavier?
Cup Leaf

7. $2 + 3 + 4 = 9$

8. 13, 14, 15, 16, 17

9. Circle the largest

24 14 33 44 4

10. Write the number thirty seven - 37

Tuesday


1. $35 + 5 = 40$

2. $13 - 6 = 7$

3. Square – How many sides? 4



4. Double the  6

5. Add 7 more  10

6. Which is longer?
Slide Finger

7. $5 + 4 + 3 = 12$

8. 29, 30, 31, 32, 33

9. Circle the largest

15 35 25 44 50


10. Write the number fifty four - 54

Wednesday

1. $42 + 8 = 50$

2. $25 - 5 = 20$

3. Oval – How many sides? 0



4. Double the  8

5. Add 7 more  11

6. Which is heavier?
Boy Plane

7. $3 + 3 + 3 = 9$

8. 26, 27, 28, 29, 30

9. Circle the largest

23 32 51 52 12

10. Write the number twenty two - 22

Thursday


1. $32 + 7 = 39$

2. $28 - 6 = 22$

3. Triangle – How many sides? 3



4. Double the  6

5. Add 7 more  10

6. Which is taller?
Girl House

7. $5 + 2 + 4 = 11$

8. 43, 44, 45, 46, 47

9. Circle the largest

12 41 22 34 43

10. Write the number thirty one - 31

Preview

Mental Maths


Monday

1. $17 + 7 = 24$

2. $14 - 6 = 8$

3. Pentagon – How many sides? 5



4. Double the  8

5. Add 7 more  11

6. Which is taller?
Tree Rabbit

7. $5 + 5 + 3 = 13$

8. 28, 29, 30, 31, 32

9. Circle the largest

34 **66** 38 14 9

10. Write the number forty five - 45


Tuesday

1. $8 + 11 = 19$

2. $28 - 8 = 20$

3. Triangle – How many sides? 3



4. Double the  4

5. Add 7 more  9

6. Which is longer?
Ruler Snake

7. $3 + 5 + 3 = 11$

8. 52, 53, 54, 55, 56

9. Circle the largest

8 9 19 18 **28** 7

10. Write the number thirty seven - 37

Wednesday

1. $13 + 5 = 18$

2. $24 - 7 = 17$

3. Rectangle – How many sides? 4



4. Double the  6

5. Add 7 more  10

6. Which is heavier?
Cup Table

7. $4 + 4 + 2 = 10$

8. 19, 20, 21, 22, 23

9. Circle the largest

52 35 15 33 8

10. Write the number seventeen - 17

Thursday

1. $27 + 6 = 33$

2. $12 - 5 = 7$

3. Circle – How many sides? 0



4. Double the  8

5. Add 7 more  11

6. Which is taller?
Pig Giraffe

7. $2 + 2 + 2 = 6$

8. 13, 14, 15, 16, 17

9. Circle the largest

24 **42** 36 17 26

10. Write the number twenty five - 25



Preview

Mental Maths

Monday

- $28 + 5 = 33$
- $25 - 7 = 18$
- Oval – How many sides? 0





- Double the  6
- Add 7 more  10
- Which is longer?
Train Bike

- $3 + 3 + 3 = 9$
- 36, 37, 38, 39, 40
- Circle the largest
25 15 35 5 45
- Write the number twenty two - 22

Tuesday

- $13 + 6 = 19$
- $34 - 6 = 28$
- Hexagon – How many sides? 6






- Double the  8
- Add 7 more  11
- Which is longer?
Worm Ant

- $4 + 5 + 2 = 11$
- 44, 45, 46, 47, 48
- Circle the largest
7 43 23 14 27
- Write the number forty five - 45

Wednesday

- $20 + 10 = 30$
- $20 - 10 = 10$
- Square – How many sides? 4





- Double the  4
- Add 7 more  9
- Which is heavier?
Pig Mouse

- $3 + 4 + 5 = 12$
- 7, 8, 9, 10, 11
- Circle the largest
19 31 23 22 27
- Write the number thirty seven - 37

Thursday

- $35 + 7 = 42$
- $19 - 8 = 11$
- Triangle – How many sides? 3



- Double the  8
- Add 7 more  11
- Who is taller?
Cat Dad

- $4 + 2 + 4 = 10$
- 22, 23, 24, 25, 26
- Circle the largest
29 45 31 13 32
- Write the number sixteen - 16



Preview

Mental Maths

Monday

- $32 + 6 = 38$
- $15 - 6 = 9$
- Month after April
May






- Add 6 more  9
- Add 9 more  12
- Is 9 odd or even?
Odd Even

- $50 + 10 = 60$
- 2, 3, 4, 5, 6
- Circle the smallest
33 45 21 12 44
- Write the number
seventeen - 17

Tuesday

- $9 + 9 = 18$
- $18 - 5 = 13$
- Month before July
June






- Add 7 more  11
- Add 8 more  12
- Is 16 odd or even?
Odd Even

- $60 + 10 = 70$
- 19, 20, 21, 22, 23
- Circle the smallest
19 18 22 17 34
- Write the number
fifty five - 55

Wednesday

- $33 + 10 = 43$
- $22 - 10 = 12$
- Month after May
June





- Add 5 more  8
- Add 7 more  10
- Is 14 odd or even?
Odd Even

- $20 + 10 = 30$
- 45, 46, 47, 48, 49
- Circle the smallest
43 34 22 32 17
- Write the number
eighteen - 18

Thursday

- $15 + 8 = 23$
- $26 - 5 = 21$
- Month before June
May



- Add 6 more  8
- Add 8 more  10
- Is 20 odd or even?
Odd Even


- $70 + 10 = 80$
- 32, 33, 34, 35, 36
- Circle the smallest
15 5 21 34 8
- Write the number
twenty two - 22



Preview

Mental Maths

Monday

- $25 + 7 = 32$
- $22 - 5 = 17$
- Month after March
April






- Add 5 more  9
- Add 7 more  11
- Is 11 odd or even?
Odd Even

- $10 + 10 = 20$
- 14, 15, 16, 17, 18
- Circle the smallest
27 43 34 21 12
- Write the number
forty three - 43

Tuesday

- $14 + 6 = 20$
- $13 - 4 = 9$
- Month before
February - January




- Add 3 more  5
- Add 9 more  11
- Is 8 odd or even?
Odd Even

- $50 + 10 = 60$
- 25, 26, 27, 28, 29
- Circle the smallest
20 21 34 32 23
- Write the number
twenty six - 26

Wednesday

- $21 + 8 = 29$
- $20 - 5 = 15$
- Month after
November - December





- Add 6 more  10
- Add 8 more  12
- Is 19 odd or even?
Odd Even

- $30 + 10 = 40$
- 37, 38, 39, 40, 41
- Circle the smallest
32 34 43 17 19
- Write the number
fourteen - 14

Thursday

- $31 + 9 = 40$
- $15 - 7 = 8$
- Month before
September - August



- Add 2 more  5
- Add 7 more  10
- Is 12 odd or even?
Odd Even

- $60 + 10 = 70$
- 19, 20, 21, 22, 23
- Circle the smallest
20 30 15 25 35
- Write the number
eighteen - 18



Preview

Mental Maths

Monday

- $13 + 6 = 19$
- $18 - 6 = 12$
- Month after July
August





- Add 2 more  4
- Add 8 more  10
- Is 13 odd or even?
Odd Even

- $60 + 10 = 70$
- 39, 40, 41, 42, 43
- Circle the smallest
51 34 12 32 41
- Write the number
nineteen - 19

Tuesday

- $19 + 5 = 24$
- $20 - 6 = 14$
- Month before April
March






- Add 5 more  8
- Add 6 more  9
- Is 4 odd or even?
Odd Even

- $80 + 10 = 90$
- 25, 26, 27, 28, 29
- Circle the smallest
42 23 19 33 11
- Write the number
thirty five - 35

Wednesday

- $25 + 6 = 31$
- $16 - 4 = 12$
- Month after March
April





- Add 3 more  5
- Add 9 more  11
- Is 15 odd or even?
Odd Even

- $20 + 10 = 30$
- 47, 48, 49, 50, 51
- Circle the smallest
25 32 24 37 41
- Write the number
twenty eight - 28

Thursday

- $18 + 6 = 24$
- $9 - 8 = 1$
- Month before June
May



- Add 5 more  9
- Add 8 more  12
- Is 6 odd or even?
Odd Even


- $10 + 10 = 20$
- 51, 52, 53, 54, 55
- Circle the smallest
31 35 34 42 51
- Write the number
thirty one - 31



Preview

Mental Maths

Monday

- $24 + 7 = 31$
- $8 - 5 = 3$
- Month after November - December






- Add 7 more  10
- Add 9 more  12
- Is 19 odd or even?
Odd Even

- $40 + 10 = 50$
- 20, 21, 22, 23, 24
- Circle the smallest
25 24 26 34 35
- Write the number thirty one - 31

Tuesday

- $13 + 6 = 19$
- $19 - 7 = 12$
- Month before August - July






- Add 6 more  10
- Add 8 more  12
- Is 6 odd or even?
Odd Even

- $70 + 10 = 80$
- 38, 39, 40, 41, 42
- Circle the smallest
18 15 22 32 24
- Write the number forty six - 46

Wednesday

- $18 + 5 = 23$
- $13 - 7 = 6$
- Month after April
May





- Add 2 more  6
- Add 7 more  9
- Is 11 odd or even?
Odd Even

- $30 + 10 = 40$
- 14, 15, 16, 17, 18
- Circle the smallest
35 45 44 51 31
- Write the number fifteen - 15

Thursday

- $32 + 7 = 39$
- $20 - 6 = 14$
- Month before September - August



- Add 3 more  5
- Add 6 more  8
- Is 8 odd or even?
Odd Even


- $60 + 10 = 70$
- 43, 44, 45, 46, 47
- Circle the smallest
12 13 18 19 15
- Write the number twenty seven - 27



Preview

Mental Maths

Monday

- $15 + 10 = 25$
- $16 - 5 = 11$
- Month after February - March





- Add 8 more  10
- Add 9 more  11
- Is 16 odd or even?
Odd Even
- $20 + 10 = 30$
- 29, 30, 31, 32, 33
- Circle the smallest
22 26 43 21 10
- Write the number forty one - 41

Tuesday


- $19 + 5 = 24$
- $27 - 5 = 22$
- Month before September - August





- Add 5 more  8
- Add 9 more  12
- Is 8 odd or even?
Odd Even
- $10 + 10 = 20$
- 18, 19, 20, 21, 22
- Circle the smallest
41 43 45 51 50
- Write the number sixteen - 16

Wednesday

- $20 + 5 = 15$
- $18 - 6 = 12$
- Month after May June





- Add 3 more  6
- Add 6 more  9
- Is 14 odd or even?
Odd Even
- $50 + 10 = 60$
- 36, 37, 38, 39, 40
- Circle the smallest
18 16 24 42 15
- Write the number twenty two - 22

Thursday

- $36 + 4 = 40$
- $26 - 4 = 22$
- Month before December - November



- Add 2 more  6
- Add 8 more  12
- Is 13 odd or even?
Odd Even
- $40 + 10 = 50$
- 22, 23, 24, 25, 26
- Circle the smallest
35 42 32 29 16
- Write the number thirty five - 35

Preview