



Mental Maths

70 Weeks

Mental Maths 10 Weeks **Mental Maths 10 Weeks** **Mental Maths 10 Weeks** **Mental Maths 4 10 Weeks**

Mental Maths 10 Weeks **Mental Maths 10 Weeks** **Mental Maths 3 10 Weeks**

Slambo Resources

Grade 2/3



Mental Maths

10 weeks

Week 2				Week 7			
Mental Maths				Mental Maths			
Monday	Tuesday	Wednesday	Thursday	Monday	Tuesday	Wednesday	Thursday
1. $18 + 12 =$ _____	1. $13 + 7 =$ _____	1. $23 + 7 =$ _____	1. $30 + 60 =$ _____	1. $40 + 40 =$ _____	1. $60 + 60 =$ _____	1. $120 + 60 =$ _____	1. $90 + 90 =$ _____
2. $18 - 12 =$ _____	2. $63 - 13 =$ _____	2. $70 - 10 =$ _____	2. $70 - 10 =$ _____	2. $7 - 11 =$ _____	2. $46 - 16 =$ _____	2. $150 - 40 =$ _____	2. $70 - 50 =$ _____
3. $3 \times 3 =$ _____	3. $8 \times 2 =$ _____	3. $4 \times 2 =$ _____	3. $4 \times 2 =$ _____	3. $5 \times 6 =$ _____	3. $6 \times 2 =$ _____	3. $4 \times 9 =$ _____	3. $8 \times 2 =$ _____
4. What's halfway between 18 & 14?	4. What's halfway between 18 & 14?	4. What's halfway between 18 & 14?	4. What's halfway between 18 & 14?	4. What is half of 40?	4. What is half of 50?	4. What is half of 92?	4. What is half of 12?
5. Value of the 5 in 591 _____	5. Value of the 8 in 218 _____	5. Value of the 5 in 634 _____	5. Value of the 8 in 218 _____	5. Value of the 4 in 648 _____	5. Value of the 7 in 759 _____	5. Value of the 2 in 8420 _____	5. Value of the 8 in 8423 _____
6. How many sides does a triangle have?	6. How many sides does a square have?	6. How does have _____	6. How does have _____	6. Circle the even numbers 18 24 45 55 17	6. Circle the odd numbers 32 56 77 81 19	6. Circle the even numbers 40 93 52 15 64	6. Circle the odd numbers 41 11 20 91
7. Write $>$, $<$ or $=$ $3 __ 9$	7. Write $>$, $<$ or $=$ $145 __ 651$	7. Write $>$, $<$ or $=$ $480 __ 480$	7. Write $>$, $<$ or $=$ $22 __ 22$	7. Write $>$, $<$ or $=$ $81 __ 19$	7. Write $>$, $<$ or $=$ $33 __ 133$	7. Write $>$, $<$ or $=$ $6387 __ 6387$	7. Write $>$, $<$ or $=$ $27 __ 75$
8. $50 + __ = 120$	8. $30 + __ = 45$	8. $15 + __ = 30$	8. $15 + __ = 30$	8. $40 - __ = 5$	8. $16 - __ = 6$	8. $33 - __ = 20$	8. $10 + __ = 10$
9. $13 + 0.7 =$ _____	9. $2.2 + 3.1 =$ _____	9. $3.4 + 0.5 =$ _____	9. $3.4 + 0.5 =$ _____	9. $7.3 + 1.2 =$ _____	9. $5.1 + 0.9 =$ _____	9. $2.5 + 1.5 =$ _____	9. $2.5 + 1.5 =$ _____
10. How many 45 make 207 _____	10. How many 45 make 6 _____	10. How many 35 make 217 _____	10. How many 35 make 217 _____	10. Double 100 _____	10. Double 900 _____	10. Double 9 _____	10. Double 9 _____

Grade 3



Mental Maths 2

10 weeks

Week 1

Mental Maths

Monday	Tuesday	Wednesday	Thursday
1. $16 + 12 =$ _____	1. $90 + 80 =$ _____	1. $22 + 16 =$ _____	1. $19 + 19 =$ _____
2. $30 - 15 =$ _____			
3. $10 \times 10 =$ _____			
4. $\frac{1}{4} + \frac{1}{4} =$ _____			
5. 2 hours after 4pm is _____			
6. $15 + 15 + 15 =$ _____			
7. Shade $\frac{4}{5}$ of the stars			
★ ★ ★ ★ ★			
8. $5 \times ___ = 25$			
9. $0.8 - 0.2 =$ _____			
10. Write in digits two hundred & forty four _____			

Week 4

Mental Maths

Monday	Tuesday	Wednesday
1. $37 + 20 =$ _____	1. $26 + 29 =$ _____	1. $160 + 45 =$ _____
2. $37 - 8 =$ _____	2. $45 - 40 =$ _____	2. $88 - 11 =$ _____
3. $5 \times 8 =$ _____	3. $7 \times 4 =$ _____	3. $3 \times 9 =$ _____
4. $\frac{1}{5} + \frac{2}{5} =$ _____	4. $\frac{1}{10} + \frac{3}{10} =$ _____	4. $\frac{1}{2} + \frac{1}{2} =$ _____
5. 3 hours after 10pm is _____	5. 45 minutes after 3:05pm is _____	5. 2 hours after 6:30am is _____
6. $60 + 70 + 70 =$ _____	6. $34 + 10 + 16 =$ _____	6. $8 + 22 + 50 =$ _____
7. Shade $\frac{2}{5}$ of the stars	7. Shade $\frac{1}{4}$ of the stars	7. Shade $\frac{1}{3}$ of the stars
★ ★ ★ ★ ★	★ ★ ★ ★ ★	★ ★ ★ ★ ★
8. $11 \times ___ = 33$	8. $6 \times ___ = 18$	8. $4 \times ___ = 32$
9. $11 - 10 =$ _____	9. $2.3 - 1.3 =$ _____	9. $4.4 - 1.2 =$ _____
10. Write in digits Six hundred & fourteen _____	10. Write in digits Three thousand & fifty two _____	10. Write in digits Five thousand, one hundred & ten _____

Week 7

Mental Maths

Monday	Tuesday	Wednesday	Thursday
1. $62 + 16 =$ _____	1. $19 + 15 =$ _____	1. $950 + 35 =$ _____	1. $12 + 25 =$ _____
2. $40 - 45 =$ _____			
3. $5 \times 1 =$ _____			
4. $\frac{5}{7} - \frac{2}{7} =$ _____			
5. 3 hours before 2:30pm is _____			
6. $32 + 25 + 15 =$ _____			
7. What fraction is shaded?			
★ ★ ★ ★ ★			
8. $5 \times ___ = 55$			
9. $1.3 - 0.5 =$ _____			
10. Write the number 587 _____			

Week 10

Mental Maths

Monday	Tuesday	Wednesday	Thursday
1. $20 + 40 =$ _____	1. $69 + 21 =$ _____	1. $15 + 74 =$ _____	1. $18 + 32 =$ _____
2. $63 - 21 =$ _____	2. $51 - 20 =$ _____	2. $18 - 13 =$ _____	2. $568 - 220 =$ _____
3. $2 \times 10 =$ _____	3. $11 \times 7 =$ _____	3. $1 \times 3 =$ _____	3. $7 \times 9 =$ _____
4. $\frac{3}{4} + \frac{1}{4} =$ _____	4. $\frac{8}{10} - \frac{3}{10} =$ _____	4. $\frac{6}{7} + \frac{1}{7} =$ _____	4. $\frac{2}{5} = \frac{___}{10}$
5. 3 hours before 1:00pm is _____	5. 30 minutes before 9:45am is _____	5. 8 hours before 10:00am is _____	5. 25 m = _____
6. $42 + 15 + 8 =$ _____	6. $40 + 70 + 80 =$ _____	6. $12 + 15 + 13 =$ _____	6. _____
7. What fraction is shaded?	7. What fraction is shaded?	7. What fraction is shaded?	7. What fraction is shaded?
★ ★ ★ ★ ★	★ ★ ★ ★ ★	★ ★ ★ ★ ★	★ ★ ★ ★ ★
8. $4 \times ___ = 20$	8. $11 \times ___ = 88$	8. $3.2 - 1.1 =$ _____	8. _____
9. $2.3 - 0.3 =$ _____	9. $3.2 - 1.1 =$ _____	9. _____	9. _____
10. Write the number 4,546 _____	10. Write the number 10,489 _____	10. Write the number _____	10. Write the number 7,324 _____

Grade 3




Mental Maths 3

10 weeks





Week 1

Mental Maths

Monday	Tuesday	Wednesday	Thursday
1. $95 + 16 =$ _____	1. $18 + 18 =$ _____	1. $85 + 12 =$ _____	1. $225 + 25 =$ _____
2. $70 - 40 =$ _____	2. _____	2. _____	2. _____
3. $4 \times 10 =$ _____	3. _____	3. _____	3. _____
4. Half of 26 = _____	4. _____	4. _____	4. _____
5. Which is heavier? 2g or 2kg? _____	5. _____	5. _____	5. _____
6. $22 \div 12 = 34$ _____	6. _____	6. _____	6. _____
7. Draw the time 3:30 	7. _____	7. _____	7. _____
8. 10, 20, 30, _____	8. _____	8. _____	8. _____
9. Order smallest to largest - 108, 14, 42, 88	9. _____	9. _____	9. _____
10. $60 - 20 - 20 =$ _____	10. _____	10. _____	10. _____


Week 3

Mental Maths

Monday	Tuesday	Wednesday	Thursday
1. $55 + 55 =$ _____	1. $87 + 23 =$ _____	1. $26 + 24 =$ _____	1. $18 + 92 =$ _____
2. $26 - 14 =$ _____	2. $92 - 31 =$ _____	2. $240 - 50 =$ _____	2. $37 - 11 =$ _____
3. $7 \times 3 =$ _____	3. $12 \times 4 =$ _____	3. $5 \times 5 =$ _____	3. $11 \times 11 =$ _____
4. Half of 80 = _____	4. Half of 72 = _____	4. Half of 160 = _____	4. Half of _____ = _____
5. Which is heavier? 7000g or 8kg? _____	5. Which is longer? 400cm or 4m? _____	5. Which is heavier? 4kg or 70g? _____	5. Which is longer? 2m or 200cm? _____
6. $27 \div 23 = 50$ _____	6. $7 \div 4 = 28$ _____	6. $11 \div 6 = 44$ _____	6. $4 \div 4 =$ _____
7. Draw the time 5:55 	7. Draw the time 2:30 	7. Draw the time 1:30 	7. Draw the time _____ 
8. 10, 90, 50, _____	8. 200, 300, 400, _____	8. 4, 15, 17, _____	8. 10, 22, 33, _____
9. Order smallest to largest - 23, 32, 13, 93	9. Order smallest to largest - 82, 2.5, 14, 41	9. Order smallest to largest - 71, 14, 54, 12	9. Order smallest to largest - 18, 44, 4.4, 5
10. $54 - 11 - 13 =$ _____	10. $25 - 15 - 12 =$ _____	10. $220 - 70 - 25 =$ _____	10. $95 - 15 - 15 =$ _____




Week 6

Mental Maths

Monday	Tuesday	Wednesday	Thursday
1. $18 + 22 =$ _____	1. $76 + 34 =$ _____	1. $125 + 35 =$ _____	1. $250 + 450 =$ _____
2. $40 - 25 =$ _____	2. $75 - 35 =$ _____	2. $32 - 20 =$ _____	2. $44 - 20 =$ _____
3. $4 \times 2 =$ _____	3. _____	3. _____	3. _____
4. Half of 34 = _____	4. _____	4. _____	4. _____
5. Which is heavier? 1000g or 1kg? _____	5. _____	5. _____	5. _____
6. $26 \div 14 = 14$ _____	6. _____	6. _____	6. _____
7. Draw the time 1:25 	7. _____	7. _____	7. _____
8. 40, 55, 30, _____	8. _____	8. _____	8. _____
9. Order smallest to largest - 31, 44, 4.8, 14	9. _____	9. _____	9. _____
10. $55 - 25 - 10 =$ _____	10. _____	10. _____	10. _____

Week 9

Mental Maths





Monday	Tuesday	Wednesday	Thursday
1. $64 + 22 =$ _____	1. $42 + 30 =$ _____	1. $25 + 65 =$ _____	1. $160 + 220 =$ _____
2. $46 - 24 =$ _____	2. $32 - 18 =$ _____	2. $100 - 35 =$ _____	2. $210 - 140 =$ _____
3. $5 \times 8 =$ _____	3. $4 \times 3 =$ _____	3. $7 \times 11 =$ _____	3. $10 \times 3 =$ _____
4. Half of 8 = _____	4. Half of 140 = _____	4. Half of 50 = _____	4. Half of 26 = _____
5. Which is heavier? 80g or 8kg? _____	5. Which is longer? 400cm or 4m? _____	5. Which is heavier? 2kg or 500g? _____	5. Which is longer? 5m or 500cm? _____
6. $11 \div 7 = 77$ _____	6. $30 \div 70 = 100$ _____	6. $31 \div 11 = 20$ _____	6. _____
7. Draw the time 1:00 	7. Draw the time 3:00 	7. Draw the time 3:50 	7. _____
8. 50, 44, 48, _____	8. 17, 20, 23, _____	8. _____	8. _____
9. Order smallest to largest - 44, 3, 46, 52	9. Order smallest to largest - 4.2, 3, 81, 74	9. _____	9. Order smallest to largest - 63, 31, 13, 47
10. $22 - 20 - 2 =$ _____	10. $81 - 11 =$ _____	10. _____	10. $50 - 20 - 20 =$ _____

Grade 3



Mental Maths 4

10 weeks







Week 1				Week 10			
Mental Maths				Mental Maths			
Monday	Tuesday	Wednesday	Thursday	Monday	Tuesday	Wednesday	Thursday
1. $44 \div 18 =$ ____	1. $14 \div 14 =$ ____			1. $85 \div 20 =$ ____	1. $140 \div 50 =$ ____	1. $12 \div 62 =$ ____	1. $95 \div 20 =$ ____
2. $36 \div 14 =$ ____	2. $75 \div 35 =$ ____			2. $86 \div 14 =$ ____	2. $72 \div 11 =$ ____	2. $230 \div 40 =$ ____	2. $180 \div 90 =$ ____
3. $6 \times 5 =$ ____	3. $8 \times 4 =$ ____			3. $8 \times 3 =$ ____	3. $11 \times 10 =$ ____	3. $12 \times 4 =$ ____	3. $5 \times 8 =$ ____
4. What's halfway between 60 & 70? ____	4. What's halfway between 50 & 52? ____			4. Half of 16 = ____	4. Half of 500 = ____	4. Half of 30 = ____	4. Half of 44 = ____
5. Value of the 7 in 795 ____	5. Value of the 8 in 428 ____			5. Which is heavier? 8000g or 8kg? ____	5. Which is longer? 400cm or 3m? ____	5. Which is heavier? 2kg or 400g? ____	5. Which is longer? 5m or 50cm? ____
6. How many sides does an oval have? ____	6. How many sides does a rectangle have? ____			6. $3 \times 3 = 9$	6. $100 \div 100 = 200$	6. $35 \div 15 = 50$	6. $8 \times 3 = 24$
7. Write $<$, $>$ or $=$ $94 \underline{\quad} 49$	7. Write $<$, $>$ or $=$ $65 \underline{\quad} 66$			7. Draw the time 5:40	7. Draw the time 2:15	7. Draw the time 8:00	7. Draw the time 4:50
8. $15 \div \underline{\quad} = 30$	8. $40 \div \underline{\quad} = 100$						
9. $13 \div 0.7 =$ ____	9. $6.5 \div 1.2 =$ ____			8. 12, 15, 18, ____	8. 39, 34, 29, ____	8. 18, 29, 34, ____	8. ____
10. How many 6s make 18? ____	10. How many 3s make 21 = ____			9. Order smallest to largest - 64, 12, 16, 16	9. Order smallest to largest - 11, 2.7, 71, 16	9. Order smallest to largest - 9, 4.5, 17, 2	9. ____
				10. $25 \div 11 = 11 =$ ____	10. $60 \div 20 = 30 =$ ____	10. $71 \div 11 =$ ____	10. ____

Grade 3



Mental Maths 3

10 weeks

Week 6	Mental Maths	Week 7	Mental Maths				
<p>Monday</p> <p>1. $14 + 10 =$ _____</p> <p>2. $22 - 6 =$ _____</p> <p>3. Write in words - 65</p> <p>4. $16 + \underline{\quad} = 20$</p> <p>5. Days in a week? _____</p> <p>6. Name the shape?</p>  <p>7. How many hundreds & tens in 560 hun. = _____ tens = _____</p> <p>8. 5 hundreds + 4 tens = _____</p> <p>9. $5 + 5 + 5 =$ _____</p> <p>10. Which is heavier? Pencil or Book</p>	<p>Tuesday</p> <p>1. $32 + 7 =$ _____</p> <p>2. $35 - 10 =$ _____</p> <p>3. Write in words - 72</p> <p>4. $22 + \underline{\quad} = 30$</p> <p>5. Days in 3 weeks? _____</p> <p>6. Name the shape?</p>  <p>7. How many hundreds & tens in 480 hun. = _____ tens = _____</p> <p>8. 3 hundreds + 9 tens = _____</p> <p>9. $3 + 10 + 7 =$ _____</p> <p>10. Which is lighter? Teddy or Chair</p>	<p>Monday</p> <p>1. $19 + 5 =$ _____</p> <p>2. $14 - 10 =$ _____</p> <p>3. Write eighty five</p> <p>4. 5th month of the year? _____</p> <p>5. 8 more than 17 = _____</p> <p>6. 7 less than 27 = _____</p> <p>7. How many tens & ones in 65 tens = _____ ones = _____</p> <p>8. 4 tens + 6 ones = _____</p> <p>9. $5 + 5 + 10 =$ _____</p> <p>10. 8, 10, 12, _____</p>	<p>Tuesday</p> <p>1. $26 + 10 =$ _____</p> <p>2. $25 - 5 =$ _____</p> <p>3. Write sixty two</p> <p>4. 8th month of the year? _____</p> <p>5. 10 more than 4 = _____</p> <p>6. 10 less than 30 = _____</p> <p>7. How many tens & ones in 33 tens = _____ ones = _____</p> <p>8. 9 tens + 2 ones = _____</p> <p>9. $10 + 10 + 10 =$ _____</p> <p>10. 12, 13, 14, _____</p>	<p>Monday</p> <p>1. $27 + 7 =$ _____</p> <p>2. $35 - 7 =$ _____</p> <p>3. Write in words - 58</p> <p>4. $20 + \underline{\quad} = 30$</p> <p>5. 1 minute = _____ secs.</p> <p>6. Name the shape?</p>  <p>7. How many hundreds & tens in 740 hun. = _____ tens = _____</p> <p>8. 4 hundreds + 8 tens = _____</p> <p>9. $4 + 16 + 10 =$ _____</p> <p>10. Which is heavier? Car or Truck</p>	<p>Tuesday</p> <p>1. $25 + 10 =$ _____</p> <p>2. $39 - 9 =$ _____</p> <p>3. Write in words - 36</p> <p>4. $32 + \underline{\quad} = 40$</p> <p>5. 2 minutes = _____ secs.</p> <p>6. Name the shape?</p>  <p>7. How many hundreds & tens in 660 hun. = _____ tens = _____</p> <p>8. 2 hundreds + 6 tens = _____</p> <p>9. $20 + 5 + 6 =$ _____</p> <p>10. Which is lighter? Plate or Tissue</p>	<p>Wednesday</p> <p>1. $18 + 7 =$ _____</p> <p>2. $18 - 10 =$ _____</p> <p>3. Write in words - 21</p> <p>4. $18 + \underline{\quad} = 26$</p> <p>5. 3 minutes = _____ secs.</p> <p>6. Name the shape?</p>  <p>7. How many hundreds & tens in 850 hun. = _____ tens = _____</p> <p>8. 3 hundreds + _____ tens = _____</p> <p>9. 13 + _____ = _____</p> <p>10. Which is lighter? Puppy or Tiger</p>	<p>Thursday</p> <p>1. $8 + 6 =$ _____</p> <p>2. $21 - 10 =$ _____</p> <p>3. Write in words - 98</p> <p>4. $11 + \underline{\quad} = 20$</p> <p>5. 4 minutes = _____ secs.</p> <p>6. Name the shape?</p>  <p>7. _____</p> <p>8. _____</p> <p>9. _____</p> <p>10. _____</p>

Grade 2



Mental Maths 2

10 weeks

Week 1

Mental Maths

Monday

- $20 + 6 =$ _____
- $27 - 10 =$ _____
- Write sixty seven
- $10 + \underline{\quad} = 20$
- Subtract 10 from 30 = _____
- Add 9 to 5 = _____
- How many sides does a triangle have?

- 2 tens + 7 ones = _____
- Circle the even
3, 1, 11, 4
- $8 + 2 + 4 =$ _____

Tuesday

- $14 + 7 =$ _____
- $50 - 8 =$ _____
- Write eighty one
- $7 + \underline{\quad} = 11$
- Subtract 6 from 20 = _____
- Add 6 to 6 = _____
- How many sides does a pentagon have?

- 5 tens + 9 ones = _____
- Circle the odd
14, 12, 5, 8
- $12 + 10 + 2 =$ _____

Week 10

Ment

Monday

- $22 + 5 =$ _____
- $32 - 6 =$ _____
- Write 34 in words
- $26 - \underline{\quad} = 16$
- Double 10 = _____
- Half 14 = _____
- Draw an oval
- 9 hundreds + 9 tens = _____
- Is 65 odd or even?
- $10 + 6 + 9 =$ _____

Tuesday

- $19 + 9 =$ _____
- $53 - 5 =$ _____
- Write 88 in words
- $14 - \underline{\quad} = 4$
- Double 9 = _____
- Half 6 = _____
- Draw a heptagon
- 5 hundreds + 8 tens = _____
- Is 32 odd or even?
- $32 + 5 + 8 =$ _____

Week 5

Mental Maths

Monday

- $6 + 8 =$ _____
- $15 - 9 =$ _____
- Write seventy five
- $6 + \underline{\quad} = 16$
- Subtract 11 from 31 = _____
- Add 4 to 39 = _____
- How many sides does a pentagon have?

- 8 tens + 3 ones = _____
- Circle the even
14, 23, 31, 11
- $3 + 4 + 5 =$ _____

Tuesday

- $14 + 8 =$ _____
- $27 - 8 =$ _____
- Write twenty seven
- $18 + \underline{\quad} = 26$
- Subtract 9 from 29 = _____
- Add 6 to 36 = _____
- How many sides does a nonagon have?

- 7 tens + 2 ones = _____
- Circle the odd
12, 15, 18, 20
- $2 + 4 + 3 =$ _____

Wednesday

- $27 + 9 =$ _____
- $16 - 8 =$ _____
- Write three hundred & nineteen _____
- $22 + \underline{\quad} = 29$
- Subtract 5 from 11 = _____
- Add 12 to 20 = _____
- How many sides does an oval have?

- 2 tens + 9 ones = _____
- Circle the
21, 11, 16
- $\underline{\quad} + 3 =$ _____

Thursday

- $33 + 8 =$ _____
- $39 - 9 =$ _____
- Write six hundred & twenty one _____
- $31 + \underline{\quad} = 40$
- Subtract 6 from 18 = _____
- Add 9 to 29 = _____
- How
does

- $\underline{\quad} + 3 =$ _____

Grade 2



Mental Maths

10 weeks

Week 1 Mental Maths

Monday	Tuesday	Wednesday	Thursday
1. $20 + 6 =$ _____	1. $10 + 3 =$ _____	1. $65 + 10 =$ _____	1. $60 + 10 =$ _____
2. $15 - 10 =$ _____	2. $9 - 5 =$ _____	2. $50 - 10 =$ _____	2. $30 - 5 =$ _____
3. Write forty five	3. Write after 9	3. Write seventy two	3. Write forty one
4. How many groups of 27 _____ ★ ★ ★	4. How many groups of 37 _____ ★ ★ ★	4. How many groups of 67 _____ ★ ★ ★ ★ ★	4. How many groups of 37 _____ ★ ★ ★ ★ ★
5. Write the number before 7 _____	5. Write after 9 _____	5. Write the number after 125 _____	5. Write the number before 43 _____
6. 2, 4, 6, _____	6. 5, 10, _____	6. 8, 10, 12, _____	6. 15, 17, 18, _____
7. Double 4 _____	7. Half _____	7. Double 100 _____	7. Half 10 _____
8. What is 10 more than 5? _____	8. What is 5? _____	8. What is 15 more than 20? _____	8. What is 10 less than 9? _____
9. Circle the largest 3, 1, 8, 4	9. Circle 21, 14, 10, 10	9. Circle the largest 62, 162, 61, 16	9. Circle the smallest 26, 19, 99, 39
10. $4 + 9 + 4 =$ _____	10. $10 + 3 + 2 =$ _____	10. $5 + 2 + 7 =$ _____	10. $7 + 2 + 2 =$ _____

Week 2 Mental Maths

Monday	Tuesday	Wednesday	Thursday
1. $20 + 10 =$ _____	1. $25 + 10 =$ _____	1. $65 + 10 =$ _____	1. $80 + 11 =$ _____
2. $30 - 5 =$ _____	2. $50 - 10 =$ _____	2. $50 - 10 =$ _____	2. $15 - 5 =$ _____
3. Write ninety one	3. Write fifty two	3. Write seventy two	3. Write ninety three
4. How many groups of 57 _____ ★ ★ ★ ★ ★	4. How many groups of 27 _____ ★ ★ ★ ★ ★	4. How many groups of 67 _____ ★ ★ ★ ★ ★	4. How many groups of 27 _____ ★ ★ ★ ★ ★
5. Write the number before 52 _____	5. Write the number after 12 _____	5. Write the number before 125 _____	5. Write the number after 55 _____
6. 7, 8, 9, _____	6. 20, 40, 60, _____	6. 8, 10, 12, _____	6. 50, 60, 70, _____
7. Double 6 _____	7. Half 100 _____	7. Double 100 _____	7. Half 200 _____
8. What is 5 more than 30? _____	8. What is 8 less than 10? _____	8. What is 15 more than 20? _____	8. What is 4 less than 100? _____
9. Circle the largest 60, 80, 40, 20	9. Circle the smallest 7, 22, 19, 25	9. Circle the largest 62, 162, 61, 16	9. Circle the smallest 23, 32, 52, 35
10. $10 + 3 + 2 =$ _____	10. $2 + 3 + 3 =$ _____	10. $5 + 2 + 7 =$ _____	10. $65 + 3 + 2 =$ _____

Week 3 Mental Maths

Monday	Tuesday	Wednesday	Thursday
1. $60 + 10 =$ _____	1. $17 + 3 =$ _____	1. $9 + 4 =$ _____	1. $80 + 11 =$ _____
2. $30 - 5 =$ _____	2. $15 - 5 =$ _____	2. $12 - 9 =$ _____	2. $16 - 5 =$ _____
3. Write forty one	3. Write seventy	3. Write seventy four	3. Write ninety three
4. How many groups of 37 _____ ★ ★ ★ ★ ★	4. How many groups of 27 _____ ★ ★ ★ ★ ★	4. How many groups of 47 _____ ★ ★ ★ ★ ★	4. How many groups of 27 _____ ★ ★ ★ ★ ★
5. Write the number before 43 _____	5. Write the number after 81 _____	5. Write the number before 100 _____	5. Write the number after 55 _____
6. 42, 43, 44, _____	6. 15, 17, 18, _____	6. 8, 8, 10, _____	6. 50, 60, 70, _____
7. Double 2 _____	7. Half 10 _____	7. Double 20 _____	7. Half 200 _____
8. What is 4 more than 26? _____	8. What is 10 less than 9? _____	8. What is 6 more than 5? _____	8. What is 4 less than 100? _____
9. Circle the largest 40, 6, 66, 46	9. Circle the smallest 26, 19, 99, 39	9. Circle the largest 23, 32, 52, 35	9. Circle the smallest 23, 32, 52, 35
10. $7 + 2 + 2 =$ _____	10. $50 + 10 + 10 =$ _____	10. $8 + 2 + 3 =$ _____	10. $65 + 3 + 2 =$ _____

Week 4 Mental Maths

Monday	Tuesday	Wednesday	Thursday
1. $15 + 5 =$ _____	1. $60 + 10 =$ _____	1. $17 + 3 =$ _____	1. $9 + 4 =$ _____
2. $60 + 10 =$ _____	2. $30 - 5 =$ _____	2. $15 - 5 =$ _____	2. $12 - 9 =$ _____
3. Write sixty four	3. Write forty one	3. Write seventy	3. Write seventy four
4. How many groups of 27 _____ ★ ★ ★ ★ ★	4. How many groups of 37 _____ ★ ★ ★ ★ ★	4. How many groups of 27 _____ ★ ★ ★ ★ ★	4. How many groups of 47 _____ ★ ★ ★ ★ ★
5. Write the number after 8 _____	5. Write the number before 100 _____	5. Write the number after 81 _____	5. Write the number before 100 _____
6. 8, 10, 12, _____	6. 15, 17, 18, _____	6. 8, 8, 10, _____	6. 50, 60, 70, _____
7. Double 4 _____	7. Half 10 _____	7. Double 20 _____	7. Half 200 _____
8. What is 7 more than 40? _____	8. What is 5 less than 35? _____	8. What is 6 more than 5? _____	8. What is 4 less than 100? _____
9. Circle the largest 54, 45, 18, 81	9. Circle the smallest 46, 64, 45, 65	9. Circle the largest 23, 32, 52, 35	9. Circle the smallest 23, 32, 52, 35
10. $3 + 1 + 3 =$ _____	10. $4 + 4 + 2 =$ _____	10. $8 + 2 + 3 =$ _____	10. $65 + 3 + 2 =$ _____

Grade 2