

Mental Maths 2

Includes:

- 10 weeks of daily mental maths
- Answer sheets
- Variety of mathematical concepts

Mathematical concepts:

- Addition
- Subtraction
- Writing digits / words
- Shapes
- Halving / Doubling
- Odd & Even Numbers
- Algebra
- Place Value

Week 1

Mental Maths

Monday	Tuesday	Wednesday	Thursday
1. $20 + 6 =$ _____	1. $14 + 7 =$ _____	1. $32 + 8 =$ _____	1. $15 + 8 =$ _____
2. $27 - 10 =$ _____	2. $50 - 8 =$ _____	2. $28 - 7 =$ _____	2. $34 - 5 =$ _____
3. Write sixty seven _____	3. Write eighty one _____	3. Write one hundred & sixty five _____	3. Write five hundred & seven _____
4. $10 +$ _____ $= 20$	4. $7 +$ _____ $= 11$	4. $15 +$ _____ $= 20$	4. $22 +$ _____ $= 27$
5. Subtract 10 from 30 $30 -$ _____ $=$ _____	5. Subtract 6 from 10 $10 -$ _____ $=$ _____	5. Subtract 7 from 12 $12 -$ _____ $=$ _____	5. Subtract 8 from 28 $28 -$ _____ $=$ _____
6. Add _____ to 10 to get 20	6. Add _____ to 5 to get 12	6. Add _____ to 8 to get 15	6. Add _____ to 3 to get 10
7. How does a pentagon differ from a square?	7. How does a triangle differ from a square?	7. How does a circle differ from a square?	7. How does a rectangle differ from a square?
8. 2 tens + 3 ones = _____	8. 1 ten + 4 ones = _____	8. 3 tens + 2 ones = _____	8. 4 tens + 1 one = _____
9. Circle the even numbers: 3, 1, 11, 15, 18, 20	9. Circle the odd numbers: 2, 4, 6, 8, 10, 12	9. Circle the even numbers: 5, 7, 9, 11, 13, 15	9. Circle the odd numbers: 1, 3, 5, 7, 9, 11
10. $8 + 4 + 5 =$ _____	10. $12 + 3 + 2 =$ _____	10. $15 + 2 + 1 =$ _____	10. $20 + 1 + 3 =$ _____

Week 10

Mental Maths

Monday	Tuesday	Wednesday	Thursday
1. $22 + 5 =$ _____	1. $19 + 9 =$ _____	1. $33 + 9 =$ _____	1. $14 + 7 =$ _____
2. $32 - 6 =$ _____	2. $53 - 5 =$ _____	2. $36 - 10 =$ _____	2. $45 - 10 =$ _____
3. Write 34 in words _____	3. Write 88 in words _____	3. Write 92 in words _____	3. Write 19 in words _____
4. $26 -$ _____ $= 16$	4. $14 -$ _____ $= 4$	4. $32 -$ _____ $= 22$	4. $51 -$ _____ $= 41$
5. Double 10 = _____	5. Double 9 = _____	5. Double 6 = _____	5. Double 3 = _____
6. Half 14 = _____	6. Half 6 = _____	6. Half 20 = _____	6. Half 30 = _____
7. Draw an oval	7. Draw a heptagon	7. Draw a decagon	7. Draw a pentagon
8. 2 tens + 3 ones = _____	8. 1 ten + 4 ones = _____	8. 3 tens + 2 ones = _____	8. 4 tens + 1 one = _____
9. Circle the even numbers: 3, 1, 11, 15, 18, 20	9. Circle the odd numbers: 2, 4, 6, 8, 10, 12	9. Circle the even numbers: 5, 7, 9, 11, 13, 15	9. Circle the odd numbers: 1, 3, 5, 7, 9, 11
10. $8 + 4 + 5 =$ _____	10. $12 + 3 + 2 =$ _____	10. $15 + 2 + 1 =$ _____	10. $20 + 1 + 3 =$ _____

Week 5

Mental Maths

Monday	Tuesday	Wednesday	Thursday
1. $6 + 8 =$ _____	1. $14 + 8 =$ _____	1. $27 + 9 =$ _____	1. $33 + 8 =$ _____
2. $15 - 9 =$ _____	2. $27 - 8 =$ _____	2. $16 - 8 =$ _____	2. $39 - 9 =$ _____
3. Write seventy five _____	3. Write twenty seven _____	3. Write three hundred & nineteen _____	3. Write six hundred & twenty one _____
4. $6 +$ _____ $= 16$	4. $18 +$ _____ $= 26$	4. $22 +$ _____ $= 29$	4. $31 +$ _____ $= 40$
5. Subtract 11 from 31 $31 -$ _____ $=$ _____	5. Subtract 9 from 29 $29 -$ _____ $=$ _____	5. Subtract 5 from 11 $11 -$ _____ $=$ _____	5. Subtract 6 from 18 $18 -$ _____ $=$ _____
6. Add 4 to 39 = _____	6. Add 6 to 36 = _____	6. Add 12 to 20 = _____	6. Add 9 to 29 = _____
7. How many sides does a pentagon have? _____	7. How many sides does a nonagon have? _____	7. How many sides does an oval have? _____	7. How many sides does a rectangle have? _____
8. 8 tens + 3 ones = _____	8. 7 tens + 2 ones = _____	8. 2 tens + 9 ones = _____	8. 3 tens + 4 ones = _____
9. Circle the even numbers: 14, 23, 31, 11	9. Circle the odd numbers: 12, 15, 18, 20	9. Circle the even numbers: 21, 11, 16, 19	9. Circle the odd numbers: 4, 8, 6, 9
10. $3 + 4 + 5 =$ _____	10. $2 + 4 + 3 =$ _____	10. $12 + 8 + 2 =$ _____	10. $4 + 3 + 3 =$ _____

Week 1

Mental Maths

Monday

- $20 + 6 = \underline{\quad}$
- $27 - 10 = \underline{\quad}$
- Write sixty seven
 $\underline{\quad}$
- $10 + \underline{\quad} = 20$
- Subtract 10 from 30 = $\underline{\quad}$
- Add 9 to 5 = $\underline{\quad}$
- How many sides does a triangle have?
 $\underline{\quad}$
- 2 tens + 7 ones = $\underline{\quad}$
- Circle the even
3, 1, 11, 4
- $8 + 2 + 4 = \underline{\quad}$

Tuesday

- $14 + 7 = \underline{\quad}$
- $50 - 8 = \underline{\quad}$
- Write eighty one
 $\underline{\quad}$
- $7 + \underline{\quad} = 11$
- Subtract 6 from 10 = $\underline{\quad}$
- Add 6 to 6 = $\underline{\quad}$
- How many sides does a pentagon have?
 $\underline{\quad}$
- 5 tens + 9 ones = $\underline{\quad}$
- Circle the odd
14, 12, 5, 8
- $12 + 10 + 2 = \underline{\quad}$

Wednesday

- $32 + 8 = \underline{\quad}$
- $28 - 7 = \underline{\quad}$
- Write one hundred & sixty five
 $\underline{\quad}$
- $15 + \underline{\quad} = 20$
- Subtract 7 from 12 = $\underline{\quad}$
- Add 7 to 3 = $\underline{\quad}$
- How many sides does a hexagon have?
 $\underline{\quad}$
- 4 tens + 3 ones = $\underline{\quad}$
- Circle the even
15, 23, 9, 14
- $20 + 5 + 5 = \underline{\quad}$

Thursday

- $15 + 8 = \underline{\quad}$
- $34 - 5 = \underline{\quad}$
- Write five hundred & seven
 $\underline{\quad}$
- $22 + \underline{\quad} = 27$
- Subtract 8 from 28 = $\underline{\quad}$
- Add 8 to 12 = $\underline{\quad}$
- How many sides does a square have?
 $\underline{\quad}$
- 1 ten + 1 one = $\underline{\quad}$
- Circle the odd
21, 20, 12, 10
- $3 + 3 + 3 = \underline{\quad}$

Preview

Mental Maths

Monday

- $5 + 15 = \underline{\quad}$
- $40 - 8 = \underline{\quad}$
- Write forty five
 $\underline{\quad}$
- $7 + \underline{\quad} = 14$
- Subtract 9 from 50
 $= \underline{\quad}$
- Add 12 to 10 = $\underline{\quad}$
- How many sides does a circle have?
 $\underline{\quad}$
- 7 tens + 3 ones
 $= \underline{\quad}$
- Circle the even
17, 15, 25, 16
- $5 + 10 + 5 = \underline{\quad}$

Tuesday

- $9 + 6 = \underline{\quad}$
- $36 - 7 = \underline{\quad}$
- Write ninety nine
- $6 + \underline{\quad} = 15$
- Subtract 4 from 32 = $\underline{\quad}$
- Add 7 to 20 = $\underline{\quad}$
- How many sides does a rectangle have? $\underline{\quad}$
- 9 tens + 2 ones
 $= \underline{\quad}$
- Circle the odd
30, 22, 9, 18
- $4 + 4 + 4 = \underline{\quad}$

Wednesday

- $26 + 9 = \underline{\quad}$
- $18 - 9 = \underline{\quad}$
- Write two hundred & twenty
- $8 + \underline{\quad} = 13$
- Subtract 8 from 24
 $= \underline{\quad}$
- Add 11 to 30 = $\underline{\quad}$
- How many sides does a octagon have?
 $\underline{\quad}$
- 2 tens + 8 ones
 $= \underline{\quad}$
- Circle the even
18, 13, 15, 23
- $31 + 4 + 5 = \underline{\quad}$

Thursday

- $31 + 9 = \underline{\quad}$
- $25 - 6 = \underline{\quad}$
- Write six hundred & fifteen $\underline{\quad}$
- $36 + \underline{\quad} = 40$
- Subtract 10 from 60 = $\underline{\quad}$
- Add 9 to 5 = $\underline{\quad}$
- How many sides does an oval have?
 $\underline{\quad}$
- 4 tens + 1 one
 $= \underline{\quad}$
- Circle the odd
30, 21, 18, 22
- $8 + 3 + 3 = \underline{\quad}$

Preview

Mental Maths

Monday

- $7 + 7 = \underline{\quad}$
- $15 - 6 = \underline{\quad}$
- Write seventy two
 $\underline{\quad}$
- $12 + \underline{\quad} = 21$
- Subtract 5 from 60
 $= \underline{\quad}$
- Add 9 to 12 = $\underline{\quad}$
- How many sides does a pentagon have?
 $\underline{\quad}$
- 7 tens + 2 ones
 $= \underline{\quad}$
- Circle the even
20, 21, 25, 27
- $10 + 10 + 10 = \underline{\quad}$

Tuesday

- $11 + 9 = \underline{\quad}$
- $40 - 8 = \underline{\quad}$
- Write sixty two
 $\underline{\quad}$
- $8 + \underline{\quad} = 16$
- Subtract 10 from 20
 $= \underline{\quad}$
- Add 13 to 30 = $\underline{\quad}$
- How many sides does a hexagon have?
 $\underline{\quad}$
- 2 tens + 7 ones
 $= \underline{\quad}$
- Circle the odd
12, 11, 10, 8
- $2 + 2 + 10 = \underline{\quad}$

Wednesday

- $15 + 6 = \underline{\quad}$
- $21 - 5 = \underline{\quad}$
- Write five hundred & twenty one
 $\underline{\quad}$
- $25 + \underline{\quad} = 35$
- Subtract 7 from 20
 $= \underline{\quad}$
- Add 6 to 46 = $\underline{\quad}$
- How many sides does a square have?
 $\underline{\quad}$
- 5 tens + 5 ones
 $= \underline{\quad}$
- Circle the even
33, 32, 29, 27
- $7 + 3 + 5 = \underline{\quad}$

Thursday

- $22 + 8 = \underline{\quad}$
- $13 - 8 = \underline{\quad}$
- Write nine hundred & sixty one
 $\underline{\quad}$
- $30 + \underline{\quad} = 40$
- Subtract 8 from 48
 $= \underline{\quad}$
- Add 8 to 4 = $\underline{\quad}$
- How many sides does an triangle have?
 $\underline{\quad}$
- 9 tens + 9 ones
 $= \underline{\quad}$
- Circle the odd
8, 7, 4, 2
- $20 + 10 + 5 = \underline{\quad}$

Preview

Mental Maths

Monday

- $8 + 9 = \underline{\quad}$
- $12 - 5 = \underline{\quad}$
- Write eighty four
 $\underline{\quad}$
- $7 + \underline{\quad} = 11$
- Subtract 9 from 20
 $= \underline{\quad}$
- Add 7 to 23 = $\underline{\quad}$
- How many sides does a heptagon have?
 $\underline{\quad}$
- 4 tens + 4 ones
 $= \underline{\quad}$
- Circle the even
31, 13, 12, 21
- $4 + 6 + 5 = \underline{\quad}$

Tuesday

- $22 + 7 = \underline{\quad}$
- $39 - 7 = \underline{\quad}$
- Write ninety seven
 $\underline{\quad}$
- $12 + \underline{\quad} = 20$
- Subtract 6 from 20
 $= \underline{\quad}$
- Add 11 to 10 = $\underline{\quad}$
- How many sides does an oval have?
 $\underline{\quad}$
- 3 tens + 5 ones
 $= \underline{\quad}$
- Circle the odd
15, 12, 22, 32
- $6 + 4 + 10 = \underline{\quad}$

Wednesday

- $16 + 5 = \underline{\quad}$
- $25 - 7 = \underline{\quad}$
- Write two hundred & sixty six
 $\underline{\quad}$
- $31 + \underline{\quad} = 40$
- Subtract 7 from 12
 $= \underline{\quad}$
- Add 9 to 9 = $\underline{\quad}$
- How many sides does a rectangle have?
 $\underline{\quad}$
- 7 tens + 7 ones
 $= \underline{\quad}$
- Circle the even
33, 13, 20, 15
- $5 + 2 + 5 = \underline{\quad}$

Thursday

- $30 + 7 = \underline{\quad}$
- $36 - 6 = \underline{\quad}$
- Write four hundred & seventy
 $\underline{\quad}$
- $20 + \underline{\quad} = 28$
- Subtract 5 from 14
 $= \underline{\quad}$
- Add 3 to 5 = $\underline{\quad}$
- How many sides does an octagon have?
 $\underline{\quad}$
- 2 tens + 4 ones
 $= \underline{\quad}$
- Circle the odd
5, 6, 8, 10
- $15 + 5 + 5 = \underline{\quad}$

Preview

Mental Maths

Monday

- $6 + 8 = \underline{\quad}$
- $15 - 9 = \underline{\quad}$
- Write seventy five
 $\underline{\quad}$
- $6 + \underline{\quad} = 16$
- Subtract 11 from 31
 $= \underline{\quad}$
- Add 4 to 39 = $\underline{\quad}$
- How many sides does a pentagon have?
 $\underline{\quad}$
- 8 tens + 3 ones
 $= \underline{\quad}$
- Circle the even
14, 23, 31, 11
- $3 + 4 + 5 = \underline{\quad}$

Tuesday

- $14 + 8 = \underline{\quad}$
- $27 - 8 = \underline{\quad}$
- Write twenty seven
 $\underline{\quad}$
- $18 + \underline{\quad} = 26$
- Subtract 9 from 29
 $= \underline{\quad}$
- Add 6 to 36 = $\underline{\quad}$
- How many sides does an nonagon have?
 $\underline{\quad}$
- 7 tens + 2 ones
 $= \underline{\quad}$
- Circle the odd
12, 15, 18, 20
- $2 + 4 + 3 = \underline{\quad}$

Wednesday

- $27 + 9 = \underline{\quad}$
- $16 - 8 = \underline{\quad}$
- Write three hundred & nineteen
 $\underline{\quad}$
- $22 + \underline{\quad} = 29$
- Subtract 5 from 11 = $\underline{\quad}$
- Add 12 to 20 = $\underline{\quad}$
- How many sides does an oval have?
 $\underline{\quad}$
- 2 tens + 9 ones
 $= \underline{\quad}$
- Circle the even
21, 11, 16, 19
- $12 + 8 + 2 = \underline{\quad}$

Thursday

- $33 + 8 = \underline{\quad}$
- $39 - 9 = \underline{\quad}$
- Write six hundred & twenty one
 $\underline{\quad}$
- $31 + \underline{\quad} = 40$
- Subtract 6 from 18
 $= \underline{\quad}$
- Add 9 to 29 = $\underline{\quad}$
- How many sides does a rectangle have?
 $\underline{\quad}$
- 3 tens + 4 ones
 $= \underline{\quad}$
- Circle the odd
4, 8, 6, 9
- $4 + 3 + 3 = \underline{\quad}$

Preview

Mental Maths

Monday

- $9 + 6 = \underline{\quad}$
- $22 - 7 = \underline{\quad}$
- Write 18 in words

- $15 - \underline{\quad} = 10$
- Double 10 - $\underline{\quad}$
- Half 16 - $\underline{\quad}$
- Draw a rectangle
- 2 hundreds + 5 tens = $\underline{\quad}$
- Is 14 odd or even?

- $5 + 10 + 3 = \underline{\quad}$

Tuesday

- $22 + 7 = \underline{\quad}$
- $30 - 9 = \underline{\quad}$
- Write 20 in words

- $28 - \underline{\quad} = 20$
- Double 5 - $\underline{\quad}$
- Half 12 - $\underline{\quad}$
- Draw a pentagon
- 4 hundreds + 8 tens = $\underline{\quad}$
- Is 17 odd or even?

- $9 + 2 + 6 = \underline{\quad}$

Wednesday

- $14 + 6 = \underline{\quad}$
- $35 - 6 = \underline{\quad}$
- Write 16 in words

- $35 - \underline{\quad} = 30$
- Double 9 - $\underline{\quad}$
- Half 20 - $\underline{\quad}$
- Draw an oval
- 3 hundreds + 2 tens = $\underline{\quad}$
- Is 27 odd or even?

- $6 + 6 + 6 = \underline{\quad}$

Thursday

- $24 + 6 = \underline{\quad}$
- $18 - 9 = \underline{\quad}$
- Write 31 in words

- $58 - \underline{\quad} = 50$
- Double 4 - $\underline{\quad}$
- Half 8 - $\underline{\quad}$
- Draw a triangle
- 2 hundreds + 9 tens = $\underline{\quad}$
- Is 22 odd or even?

- $18 + 2 + 8 = \underline{\quad}$

Preview

Week 7

Mental Maths

Monday

- $12 + 10 = \underline{\quad}$
- $21 - 6 = \underline{\quad}$
- Write 27 in words

- $24 - \underline{\quad} = 19$
- Double 11 - $\underline{\quad}$
- Half 22 - $\underline{\quad}$
- Draw an octagon

- 9 hundreds + 2 tens = $\underline{\quad}$
- Is 26 odd or even?

- $3 + 3 + 3 = \underline{\quad}$

Tuesday

- $29 + 9 = \underline{\quad}$
- $41 - 6 = \underline{\quad}$
- Write 45 in words

- $34 - \underline{\quad} = 29$
- Double 3 - $\underline{\quad}$
- Half 16 - $\underline{\quad}$
- Draw a hexagon

- 3 hundreds + 7 tens = $\underline{\quad}$
- Is 37 odd or even?

- $5 + 15 + 5 = \underline{\quad}$

Wednesday

- $8 + 9 = \underline{\quad}$
- $31 - 6 = \underline{\quad}$
- Write 63 in words

- $16 - \underline{\quad} = 9$
- Double 10 - $\underline{\quad}$
- Half 4 - $\underline{\quad}$
- Draw a circle

- 6 hundreds + 4 tens = $\underline{\quad}$
- Is 44 odd or even?

- $10 + 10 + 7 = \underline{\quad}$

Thursday

- $6 + 22 = \underline{\quad}$
- $51 - 6 = \underline{\quad}$
- Write 19 in words

- $28 - \underline{\quad} = 20$
- Double 5 - $\underline{\quad}$
- Half 2 - $\underline{\quad}$
- Draw a square

- 9 hundreds + 9 tens = $\underline{\quad}$
- Is 11 odd or even?

- $4 + 4 + 4 = \underline{\quad}$

Preview

Mental Maths

Monday

- $25 + 10 = \underline{\quad}$
- $28 - 7 = \underline{\quad}$
- Write 35 in words

- $12 - \underline{\quad} = 2$
- Double 14 - $\underline{\quad}$
- Half 26 - $\underline{\quad}$
- Draw a heptagon
- 5 hundreds + 5 tens
 $= \underline{\quad}$
- Is 32 odd or even?

- $7 + 3 + 7 = \underline{\quad}$

Tuesday

- $45 + 10 = \underline{\quad}$
- $19 - 8 = \underline{\quad}$
- Write 14 in words

- $45 - \underline{\quad} = 40$
- Double 9 - $\underline{\quad}$
- Half 8 - $\underline{\quad}$
- Draw a decagon
- 2 hundreds + 8 tens
 $= \underline{\quad}$
- Is 85 odd or even?

- $9 + 6 + 5 = \underline{\quad}$

Wednesday

- $7 + 8 = \underline{\quad}$
- $26 - 6 = \underline{\quad}$
- Write 72 in words

- $28 - \underline{\quad} = 25$
- Double 7 - $\underline{\quad}$
- Half 14 - $\underline{\quad}$
- Draw a pentagon
- 5 hundreds + 9 tens
 $= \underline{\quad}$
- Is 64 odd or even?

- $15 + 5 + 9 = \underline{\quad}$

Thursday

- $9 + 6 = \underline{\quad}$
- $44 - 5 = \underline{\quad}$
- Write 81 in words

- $34 - \underline{\quad} = 29$
- Double 3 - $\underline{\quad}$
- Half 16 - $\underline{\quad}$
- Draw a hexagon
- 2 hundreds + 3 tens
 $= \underline{\quad}$
- Is 15 odd or even?

- $22 + 8 + 4 = \underline{\quad}$

Preview

Mental Maths

Monday

- $17 + 8 = \underline{\quad}$
- $40 - 10 = \underline{\quad}$
- Write 66 in words

- $50 - \underline{\quad} = 45$
- Double 12 - $\underline{\quad}$
- Half 18 - $\underline{\quad}$
- Draw an octagon
- 7 hundreds + 3 tens = $\underline{\quad}$
- Is 44 odd or even?

- $30 + 9 + 6 = \underline{\quad}$

Tuesday

- $24 + 7 = \underline{\quad}$
- $39 - 6 = \underline{\quad}$
- Write 75 in words

- $35 - \underline{\quad} = 25$
- Double 3 - $\underline{\quad}$
- Half 18 - $\underline{\quad}$
- Draw a nonagon
- 4 hundreds + 4 tens = $\underline{\quad}$
- Is 55 odd or even?

- $21 + 9 + 7 = \underline{\quad}$

Wednesday

- $16 + 6 = \underline{\quad}$
- $25 - 8 = \underline{\quad}$
- Write 82 in words

- $18 - \underline{\quad} = 10$
- Double 5 - $\underline{\quad}$
- Half 12 - $\underline{\quad}$
- Draw a rectangle
- 3 hundreds + 2 tens = $\underline{\quad}$
- Is 24 odd or even?

- $8 + 8 + 8 = \underline{\quad}$

Thursday

- $28 + 8 = \underline{\quad}$
- $15 - 7 = \underline{\quad}$
- Write 71 in words

- $36 - \underline{\quad} = 30$
- Double 13 - $\underline{\quad}$
- Half 2 - $\underline{\quad}$
- Draw a square
- 7 hundreds + 8 tens = $\underline{\quad}$
- Is 33 odd or even?

- $4 + 12 + 4 = \underline{\quad}$

Preview

Mental Maths

Monday

- $22 + 5 = \underline{\quad}$
- $32 - 6 = \underline{\quad}$
- Write 34 in words

- $26 - \underline{\quad} = 16$
- Double 10 - $\underline{\quad}$
- Half 14 - $\underline{\quad}$
- Draw an oval
- 9 hundreds + 9 tens = $\underline{\quad}$
- Is 65 odd or even?

- $14 + 6 + 9 = \underline{\quad}$

Tuesday

- $19 + 9 = \underline{\quad}$
- $53 - 5 = \underline{\quad}$
- Write 88 in words

- $14 - \underline{\quad} = 4$
- Double 9 - $\underline{\quad}$
- Half 6 - $\underline{\quad}$
- Draw a heptagon
- 5 hundreds + 8 tens = $\underline{\quad}$
- Is 32 odd or even?

- $32 + 5 + 8 = \underline{\quad}$

Wednesday

- $33 + 9 = \underline{\quad}$
- $36 - 10 = \underline{\quad}$
- Write 92 in words

- $32 - \underline{\quad} = 22$
- Double 6 - $\underline{\quad}$
- Half 20 - $\underline{\quad}$
- Draw a decagon
- 2 hundreds + 7 tens = $\underline{\quad}$
- Is 19 odd or even?

- $19 + 7 + 3 = \underline{\quad}$

Thursday

- $14 + 7 = \underline{\quad}$
- $45 - 10 = \underline{\quad}$
- Write 19 in words

- $51 - \underline{\quad} = 41$
- Double 3 - $\underline{\quad}$
- Half 30 - $\underline{\quad}$
- Draw a pentagon
- 3 hundreds + 9 tens = $\underline{\quad}$
- Is 12 odd or even?

- $16 + 8 + 4 = \underline{\quad}$

Preview

Week 1

Mental Maths

Monday

- $20 + 6 = 26$
- $27 - 10 = 17$
- Write sixty seven
67
- $10 + 10 = 20$
- Subtract 10 from 30 = 20
- Add 9 to 5 = 14
- How many sides does a triangle have?
3
- 2 tens + 7 ones = 27
- Circle the even
3, 1, 11, 4
- $8 + 2 + 4 = 14$

Tuesday

- $14 + 7 = 21$
- $50 - 8 = 42$
- Write eighty one
81
- $7 + 4 = 11$
- Subtract 6 from 10 = 4
- Add 6 to 6 = 12
- How many sides does a pentagon have?
5
- 5 tens + 9 ones = 59
- Circle the odd
14, 12, 5, 8
- $12 + 10 + 2 = 24$

Wednesday

- $32 + 8 = 40$
- $28 - 7 = 21$
- Write one hundred & sixty five - 165
- $15 + 5 = 20$
- Subtract 7 from 12 = 5
- Add 7 to 3 = 10
- How many sides does a hexagon have?
6
- 4 tens + 3 ones = 43
- Circle the even
15, 23, 9, 14
- $20 + 5 + 5 = 30$

Thursday

- $15 + 8 = 23$
- $34 - 5 = 29$
- Write five hundred & seven - 507
- $22 + 5 = 27$
- Subtract 8 from 28 = 20
- Add 8 to 12 = 20
- How many sides does a square have?
4
- 1 ten + 1 one = 11
- Circle the odd
21, 20, 12, 10
- $3 + 3 + 3 = 9$

Preview

Week 2

Mental Maths

Monday

- $5 + 15 =$
- $40 - 8 = 32$
- Write forty five
45
- $7 + 7 = 14$
- Subtract 9 from 50
 $= 41$
- Add 12 to 10 $= 22$
- How many sides does a circle have?
0
- 7 tens + 3 ones
 $= 73$
- Circle the even
17, 15, 25, 16
- $5 + 10 + 5 = 20$

Tuesday

- $9 + 6 = 15$
- $36 - 7 = 31$
- Write ninety nine
99
- $6 + 9 = 15$
- Subtract 4 from
 $32 = 28$
- Add 7 to 20 $= 27$
- How many sides does a rectangle have?
4
- 9 tens + 2 ones
 $= 92$
- Circle the odd
30, 22, 9, 18
- $4 + 4 + 4 = 12$

Wednesday

- $26 + 9 = 35$
- $18 - 9 = 9$
- Write two hundred & twenty - 220
- $8 + 5 = 13$
- Subtract 8 from 24
 $= 16$
- Add 11 to 30 $= 41$
- How many sides does a octagon have?
8
- 2 tens + 8 ones
 $= 28$
- Circle the even
18, 13, 15, 23
- $31 + 4 + 5 = 40$

Thursday

- $31 + 9 = 40$
- $25 - 6 = 19$
- Write six hundred & fifteen - 615
- $36 + 4 = 40$
- Subtract 10 from
 $60 = 50$
- Add 9 to 5 $= 14$
- How many sides does an oval have?
0
- 4 tens + 1 one
 $= 41$
- Circle the odd
30, 21, 18, 22
- $8 + 3 + 3 = 14$

Preview

Mental Maths

Monday

- $7 + 7 = 14$
- $15 - 6 = 9$
- Write seventy two
22
- $12 + 9 = 21$
- Subtract 5 from 60
 $= 55$
- Add 9 to 12 = 21
- How many sides does a pentagon have?
5
- 7 tens + 2 ones
 $= 72$
- Circle the even
20, 21, 25, 27
- $10 + 10 + 10 = 30$

Tuesday

- $11 + 9 = 20$
- $40 - 8 = 32$
- Write sixty two
62
- $8 + 8 = 16$
- Subtract 10 from 20
 $= 10$
- Add 13 to 30 = 43
- How many sides does a hexagon have?
6
- 2 tens + 7 ones
 $= 27$
- Circle the odd
12, 11, 10, 8
- $2 + 2 + 10 = 14$

Wednesday

- $15 + 6 = 21$
- $21 - 5 = 16$
- Write five hundred & twenty one - 521
- $25 + 10 = 35$
- Subtract 7 from 20
 $= 13$
- Add 6 to 46 = 52
- How many sides does a square have?
4
- 5 tens + 5 ones
 $= 55$
- Circle the even
33, 32, 29, 27
- $7 + 3 + 5 = 15$

Thursday

- $22 + 8 = 30$
- $13 - 8 = 5$
- Write nine hundred & sixty one - 961
- $30 + 10 = 40$
- Subtract 8 from 48 = 40
- Add 8 to 4 = 12
- How many sides does an triangle have?
3
- 9 tens + 9 ones
 $= 99$
- Circle the odd
8, 7, 4, 2
- $20 + 10 + 5 = 35$

Preview

Mental Maths

Monday

- $8 + 9 = 17$
- $12 - 5 = 7$
- Write eighty four
84
- $7 + 4 = 11$
- Subtract 9 from 20
 $= 11$
- Add 7 to 23 $= 30$
- How many sides does a heptagon have?
7
- 4 tens + 4 ones
 $= 44$
- Circle the even
31, 13, 12, 21
- $4 + 6 + 5 = 15$

Tuesday

- $22 + 7 = 29$
- $39 - 7 = 32$
- Write ninety seven
97
- $12 + 8 = 20$
- Subtract 6 from 20
 $= 24$
- Add 11 to 10 $= 21$
- How many sides does an oval have?
0
- 3 tens + 5 ones
 $= 35$
- Circle the odd
15, 12, 22, 32
- $6 + 4 + 10 = 20$

Wednesday

- $16 + 5 = 21$
- $25 - 7 = 18$
- Write two hundred & sixty six - 266
- $31 + 9 = 40$
- Subtract 7 from 12
 $= 5$
- Add 9 to 9 $= 18$
- How many sides does a rectangle have?
4
- 7 tens + 7 ones
 $= 77$
- Circle the even
33, 13, 20, 15
- $5 + 2 + 5 = 12$

Thursday

- $30 + 7 = 37$
- $36 - 6 = 30$
- Write four hundred & seventy - 470
- $20 + 8 = 28$
- Subtract 5 from 14
 $= 9$
- Add 3 to 5 $= 8$
- How many sides does an octagon have?
8
- 2 tens + 4 ones
 $= 24$
- Circle the odd
5, 6, 8, 10
- $15 + 5 + 5 = 25$

Preview

Mental Maths

Monday

- $6 + 8 = 14$
- $15 - 9 = 6$
- Write seventy five
75
- $6 + 10 = 16$
- Subtract 11 from 31
 $= 20$
- Add 4 to 39 = 43
- How many sides does a pentagon have?
5
- 8 tens + 3 ones
 $= 83$
- Circle the even
14, 23, 31, 11
- $3 + 4 + 5 = 12$

Tuesday

- $14 + 8 = 22$
- $27 - 8 = 19$
- Write twenty seven
27
- $18 + 8 = 26$
- Subtract 9 from 29
 $= 20$
- Add 6 to 36 = 42
- How many sides does an nonagon have?
9
- 7 tens + 2 ones
 $= 72$
- Circle the odd
12, 15, 18, 20
- $2 + 4 + 3 = 9$

Wednesday

- $27 + 9 = 36$
- $16 - 8 = 8$
- Write three hundred & nineteen - 319
- $22 + 7 = 29$
- Subtract 5 from 11 =
6
- Add 12 to 20 = 32
- How many sides does an oval have?
0
- 2 tens + 9 ones
 $= 29$
- Circle the even
21, 11, 16, 19
- $12 + 8 + 2 = 22$


Thursday

- $33 + 8 = 41$
- $39 - 9 = 30$
- Write six hundred & twenty one - 621
- $31 + 9 = 40$
- Subtract 6 from 18
 $= 12$
- Add 9 to 29 = 38
- How many sides does a rectangle have? 4
- 3 tens + 4 ones
 $= 34$
- Circle the odd
4, 8, 6, 9
- $4 + 3 + 3 = 10$


Preview

Mental Maths

Monday


- $9 + 6 = 15$
- $22 - 7 = 15$
- Write 18 in words
eighteen
- $15 - 5 = 10$
- Double 10 - 20
- Half 16 - 8
- Draw a rectangle

- 2 hundreds + 5 tens
= 250
- Is 14 odd or even?
even
- $5 + 10 + 3 = 18$

Tuesday

- $22 + 7 = 29$
- $30 - 9 = 21$
- Write 20 in words
twenty
- $28 - 8 = 20$
- Double 6 - 12
- Half 12 - 6
- Draw a pentagon



- 4 hundreds + 8 tens
= 480
- Is 17 odd or even?
odd
- $9 + 2 + 6 = 17$

Wednesday

- $14 + 6 = 20$
- $35 - 6 = 29$
- Write 16 in words
sixteen
- $35 - 5 = 30$
- Double 9 - 18
- Half 20 - 10
- Draw an oval


- 3 hundreds + 2 tens
= 320
- Is 27 odd or even?
odd
- $6 + 6 + 6 = 18$

Thursday

- $24 + 6 = 30$
- $18 - 9 = 9$
- Write 31 in words
thirty one
- $58 - 8 = 50$
- Double 4 - 8
- Half 8 - 4
- Draw a triangle


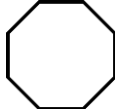
- 2 hundreds + 9 tens
= 290
- Is 22 odd or even?
even
- $18 + 2 + 8 = 28$

Preview


Week 7

Mental Maths

Monday


- $12 + 10 = 22$
- $21 - 6 = 15$
- Write 27 in words
twenty seven
- $24 - 5 = 19$
- Double 11 - 22
- Half 22 - 11
- Draw an octagon

- 9 hundreds + 2 tens
= 920
- Is 26 odd or even?
even
- $3 + 3 + 3 = 9$

Tuesday

- $29 + 9 = 38$
- $41 - 6 = 35$
- Write 45 in words
forty five
- $34 - 5 = 29$
- Double 3 - 6
- Half 16 - 8
- Draw a hexagon



- 3 hundreds + 7 tens
= 370
- Is 37 odd or even?
odd
- $5 + 15 + 5 = 25$

Wednesday

- $8 + 9 = 17$
- $31 - 6 = 25$
- Write 63 in words
sixty three
- $16 - 5 = 9$
- Double 10 - 20
- Half 4 - 2
- Draw a circle


- 6 hundreds + 4 tens
= 640
- Is 44 odd or even?
even
- $10 + 10 + 7 = 27$

Thursday

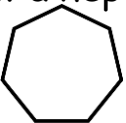
- $6 + 22 = 28$
- $51 - 6 = 45$
- Write 19 in words
nineteen
- $28 - 8 = 20$
- Double 5 - 10
- Half 2 - 1
- Draw a square


- 9 hundreds + 9 tens
= 990
- Is 11 odd or even?
odd
- $4 + 4 + 4 = 12$


Preview

Mental Maths


Monday

- $25 + 10 = 35$
- $28 - 7 = 21$
- Write 35 in words
thirty five
- $12 - 10 = 2$
- Double 14 - 28
- Half 26 - 13
- Draw a heptagon

- 5 hundreds + 5 tens
= 550
- Is 32 odd or even?
even
- $7 + 3 + 7 = 17$


Tuesday

- $45 + 10 = 55$
- $19 - 8 = 11$
- Write 14 in words
fourteen
- $45 - 5 = 40$
- Double 9 - 18
- Half 8 - 4
- Draw a decagon

- 2 hundreds + 8 tens
= 280
- Is 85 odd or even?
odd
- $9 + 6 + 5 = 20$

Wednesday

- $7 + 8 = 15$
- $26 - 6 = 20$
- Write 72 in words
seventy two
- $28 - 3 = 25$
- Double 7 - 14
- Half 14 - 7
- Draw a pentagon

- 5 hundreds + 9 tens
= 590
- Is 64 odd or even?
even
- $15 + 5 + 9 = 29$

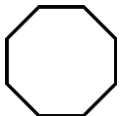
Thursday

- $9 + 6 = 15$
- $44 - 5 = 39$
- Write 81 in words
eighty one
- $34 - 5 = 29$
- Double 3 - 6
- Half 16 - 8
- Draw a hexagon

- 2 hundreds + 3 tens
= 230
- Is 15 odd or even?
odd
- $22 + 8 + 4 = 34$


Preview

Mental Maths


Monday

1. $17 + 8 = 25$
2. $40 - 10 = 30$
3. Write 66 in words
sixty six
4. $50 - 5 = 45$
5. Double 12 - 24
6. Half 18 - 9
7. Draw an octagon

8. 7 hundreds + 3 tens
= 730
9. Is 44 odd or even?
even
10. $30 + 9 + 6 = 45$


Tuesday

1. $24 + 7 = 31$
2. $39 - 6 = 33$
3. Write 75 in words
seventy five
4. $35 - 10 = 25$
5. Double 8 - 16
6. Half 18 - 9
7. Draw a nonagon

8. 4 hundreds + 4 tens
= 440
9. Is 55 odd or even?
odd
10. $21 + 9 + 7 = 37$

Wednesday

1. $16 + 6 = 32$
2. $25 - 8 = 17$
3. Write 82 in words
eighty two
4. $18 - 8 = 10$
5. Double 5 - 10
6. Half 12 - 6
7. Draw a rectangle

8. 3 hundreds + 2 tens
= 320
9. Is 24 odd or even?
even
10. $8 + 8 + 8 = 24$


Thursday

1. $28 + 8 = 36$
2. $15 - 7 = 8$
3. Write 71 in words
seventy one
4. $36 - 6 = 30$
5. Double 13 - 26
6. Half 2 - 1
7. Draw a square

8. 7 hundreds + 8 tens
= 780
9. Is 33 odd or even?
odd
10. $4 + 12 + 4 = 20$

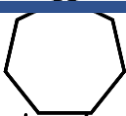
Preview

Mental Maths

Monday


- $22 + 5 = 27$
- $32 - 6 = 26$
- Write 34 in words
thirty four
- $26 - 10 = 16$
- Double 10 - 20
- Half 14 - 7
- Draw an oval

- 9 hundreds + 9 tens
= 990
- Is 65 odd or even?
odd
- $14 + 6 + 9 = 29$

Tuesday

- $19 + 9 = 28$
- $53 - 5 = 48$
- Write 88 in words
eighty eight
- $14 - 10 = 4$
- Double 9 - 18
- Half 6 - 3
- Draw a heptagon



- 5 hundreds + 8 tens
= 580
- Is 32 odd or even?
even
- $32 + 5 + 8 = 45$

Wednesday

- $33 + 9 = 41$
- $36 - 10 = 26$
- Write 92 in words
ninety two
- $32 - 10 = 22$
- Double 6 - 12
- Half 20 - 10
- Draw a decagon


- 2 hundreds + 7 tens
= 270
- Is 19 odd or even?
odd
- $19 + 7 + 3 = 29$

Thursday

- $14 + 7 = 21$
- $45 - 10 = 35$
- Write 19 in words
nineteen
- $51 - 10 = 41$
- Double 3 - 6
- Half 30 - 15
- Draw a pentagon


- 3 hundreds + 9 tens
= 390
- Is 12 odd or even?
even
- $16 + 8 + 4 = 28$

Preview